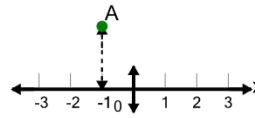




Math worksheet on 'Cartesian Grid - X Coordinate number line (indicator) (Level 3)'. Part of a broader unit on 'Cartesian Grid Foundations'

Learn online: app.mobius.academy/math/units/cartesian_grid_foundations/

1 What is the value of 'x' for this point labelled 'A'?



a $x = -1$

b $x = 0$

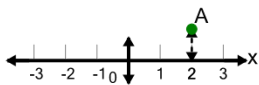
c $x = 1$

d $x = -3$

e $x = -2$

f $x = 2$

2 What is the value of 'x' for this point labelled 'A'?



a $x = 0$

b $x = 1$

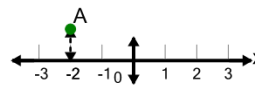
c $x = -1$

d $x = 2$

e $x = 5$

f $x = 3$

3 What is the value of 'x' for this point labelled 'A'?



a $x = 1$

b $x = -4$

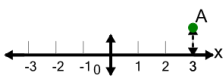
c $x = -2$

d $x = -5$

e $x = -3$

f $x = 0$

4 What is the value of 'x' for this point labelled 'A'?



a $x = 6$

b $x = 4$

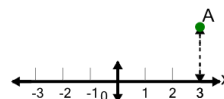
c $x = 2$

d $x = 3$

e $x = 0$

f $x = 1$

5 What is the value of 'x' for this point labelled 'A'?



a $x = 5$

b $x = 4$

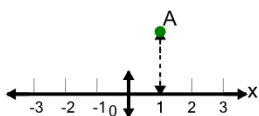
c $x = 3$

d $x = 6$

e $x = 1$

f $x = 2$

6 What is the value of 'x' for this point labelled 'A'?



a $x = -2$

b $x = 0$

c $x = 3$

d $x = -1$

e $x = 2$

f $x = 1$