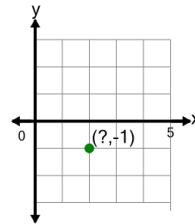




Math worksheet on 'Cartesian Grid - Points (X only) (no indicator) (Level 2)'. Part of a broader unit on 'Cartesian Grid Foundations'

Learn online: app.mobius.academy/math/units/cartesian_grid_foundations/

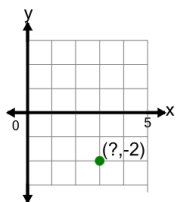
1



Identify the x value of the point's coordinates

a	1	b	0
c	6	d	3
e	2	f	5

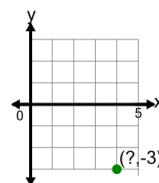
2



Identify the x value of the point's coordinates

a	6	b	5
c	7	d	3
e	2	f	1

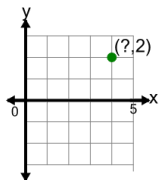
3



Identify the x value of the point's coordinates

a	1	b	8
c	7	d	6
e	4	f	5

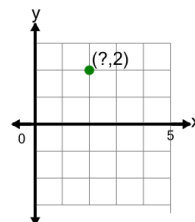
4



Identify the x value of the point's coordinates

a	2	b	7
c	6	d	1
e	4	f	3

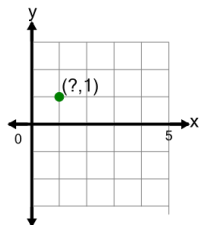
5



Identify the x value of the point's coordinates

a	5	b	1
c	6	d	4
e	3	f	2

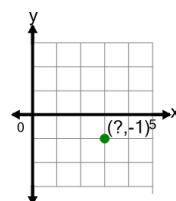
6



Identify the x value of the point's coordinates

a	3	b	5
c	4	d	0
e	1	f	2

7



Identify the x value of the point's coordinates

a	1	b	3
c	6	d	7
e	2	f	4