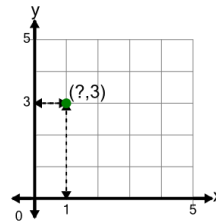




Math worksheet on 'Cartesian Grid - Points (X only) (indicator) (Level 1)'. Part of a broader unit on 'Cartesian Grid Foundations'

Learn online: app.mobius.academy/math/units/cartesian_grid_foundations/

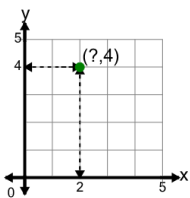
1



Identify the x value of the point's coordinates

a	1	b	0
c	3	d	2
e	5	f	4

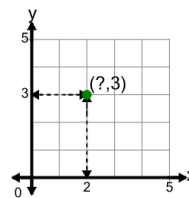
2



Identify the x value of the point's coordinates

a	3	b	1
c	4	d	2
e	5	f	6

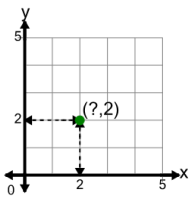
3



Identify the x value of the point's coordinates

a	6	b	2
c	5	d	0
e	4	f	1

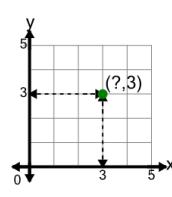
4



Identify the x value of the point's coordinates

a	2	b	4
c	6	d	1
e	3	f	5

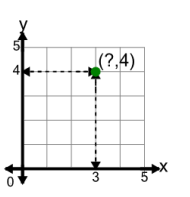
5



Identify the x value of the point's coordinates

a	4	b	3
c	1	d	7
e	5	f	6

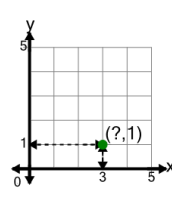
6



Identify the x value of the point's coordinates

a	6	b	2
c	5	d	7
e	3	f	1

7



Identify the x value of the point's coordinates

a	3	b	7
c	2	d	5
e	1	f	0