

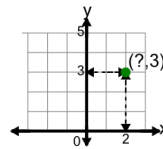


Math worksheet on 'Cartesian Grid - Points (X only) (indicator) (Level 3)'. Part of a broader unit on 'Cartesian Grid Foundations'

Learn online: app.mobius.academy/math/units/cartesian_grid_foundations/

1

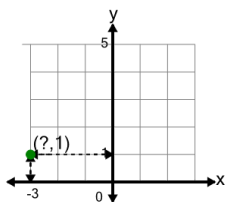
Identify the x value of the point's coordinates



a	2	b	3
c	6	d	5
e	0	f	4

2

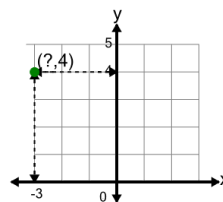
Identify the x value of the point's coordinates



a	6	b	2
c	1	d	3
e	0	f	-3

3

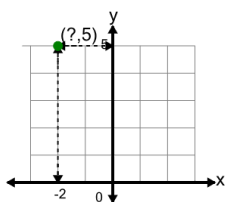
Identify the x value of the point's coordinates



a	5	b	-3
c	6	d	2
e	0	f	1

4

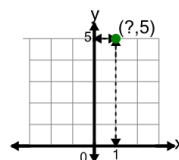
Identify the x value of the point's coordinates



a	4	b	-2
c	5	d	1
e	2	f	3

5

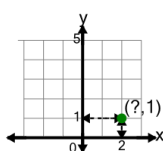
Identify the x value of the point's coordinates



a	1	b	4
c	0	d	5
e	2		

6

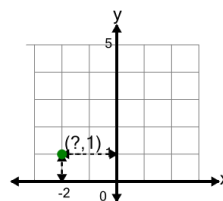
Identify the x value of the point's coordinates



a	5	b	4
c	3	d	0
e	2	f	1

7

Identify the x value of the point's coordinates



a	-2	b	0
c	1	d	4
e	2	f	5