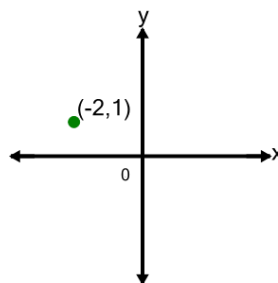




Math worksheet on 'Cartesian Grid - Meaning of Given Coordinate (no grid) (Level 4)'. Part of a broader unit on 'Cartesian Grid Foundations'

Learn online: app.mobius.academy/math/units/cartesian_grid_foundations/

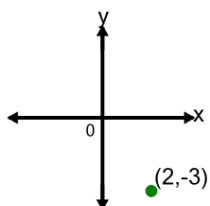
1



What does the value 1 in the point's coordinate mean?

- a x is equal to 1
- b x is equal to -1
- c y is equal to 1
- d y is equal to -1

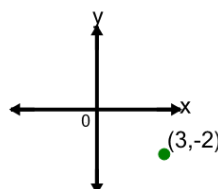
2



What does the value -3 in the point's coordinate mean?

- a y is equal to -3
- b x is equal to -3
- c x is equal to 3
- d y is equal to 3

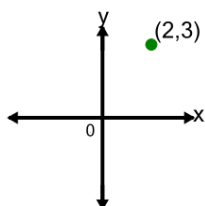
3



What does the value 3 in the point's coordinate mean?

- a x is equal to 3
- b y is equal to -3
- c y is equal to 3
- d x is equal to -3

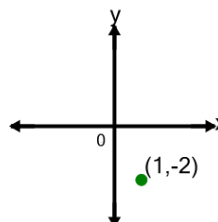
4



What does the value 2 in the point's coordinate mean?

- a y is equal to -2
- b x is equal to 2
- c x is equal to -2
- d y is equal to 2

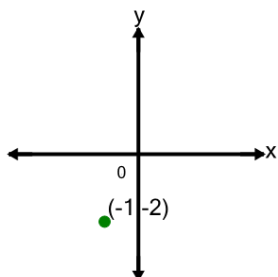
5



What does the value 1 in the point's coordinate mean?

- a x is equal to 1
- b x is equal to -1
- c y is equal to -1
- d y is equal to 1

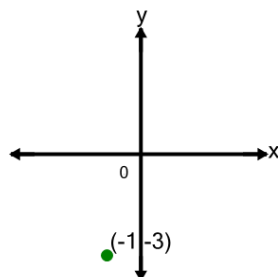
6



What does the value -1 in the point's coordinate mean?

- a x is equal to 1
- b x is equal to -1
- c y is equal to -1
- d y is equal to 1

7



What does the value -1 in the point's coordinate mean?

- a y is equal to -1
- b x is equal to 1
- c x is equal to -1
- d y is equal to 1