

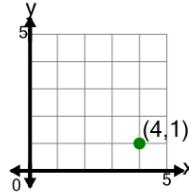


Math worksheet on 'Cartesian Grid - Meaning of Given Coordinate (no indicator) (Level 1)'. Part of a broader unit on 'Cartesian Grid Foundations'

Learn online: [app.mobius.academy/math/units/cartesian\\_grid\\_foundations/](http://app.mobius.academy/math/units/cartesian_grid_foundations/)

1

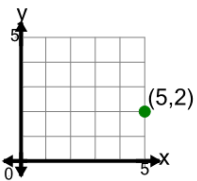
What does the value 1 in the point's coordinate mean?



- a x is equal to 1
- b y is equal to 1
- c y is equal to -1
- d x is equal to -1

2

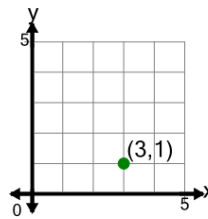
What does the value 5 in the point's coordinate mean?



- a x is equal to 5
- b x is equal to -5
- c y is equal to -5
- d y is equal to 5

3

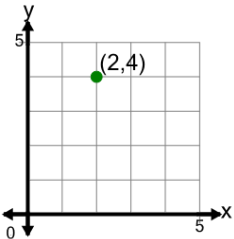
What does the value 1 in the point's coordinate mean?



- a y is equal to -1
- b x is equal to 1
- c y is equal to 1
- d x is equal to -1

4

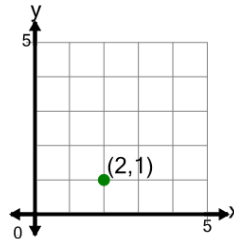
What does the value 2 in the point's coordinate mean?



- a y is equal to 2
- b x is equal to -2
- c y is equal to -2
- d x is equal to 2

5

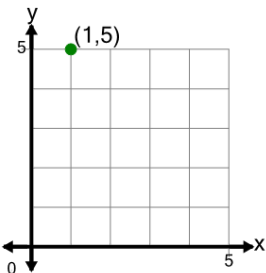
What does the value 2 in the point's coordinate mean?



- a x is equal to 2
- b y is equal to -2
- c y is equal to 2
- d x is equal to -2

6

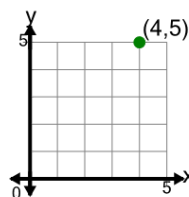
What does the value 1 in the point's coordinate mean?



- a y is equal to -1
- b x is equal to 1
- c y is equal to 1
- d x is equal to -1

7

What does the value 4 in the point's coordinate mean?



- a x is equal to -4
- b y is equal to -4
- c x is equal to 4
- d y is equal to 4