

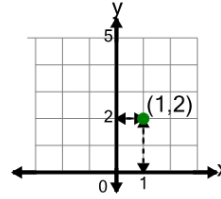


Math worksheet on 'Cartesian Grid - Meaning of Given Coordinate (indicator) (Level 3)'. Part of a broader unit on 'Cartesian Grid Foundations'

Learn online: app.mobius.academy/math/units/cartesian_grid_foundations/

1

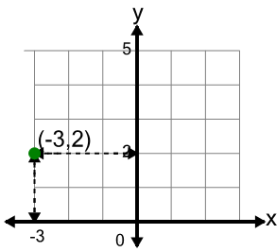
What does the value 2 in the point's coordinate mean?



- a x is equal to -2
- b y is equal to 2
- c x is equal to 2
- d y is equal to -2

2

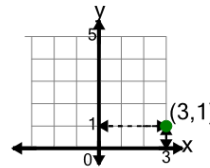
What does the value 2 in the point's coordinate mean?



- a x is equal to 2
- b y is equal to -2
- c x is equal to -2
- d y is equal to 2

3

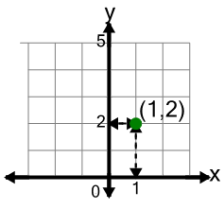
What does the value 3 in the point's coordinate mean?



- a x is equal to -3
- b y is equal to 3
- c y is equal to -3
- d x is equal to 3

4

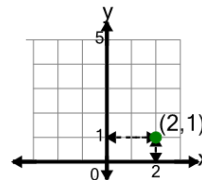
What does the value 1 in the point's coordinate mean?



- a x is equal to 1
- b y is equal to 1
- c x is equal to -1
- d y is equal to -1

5

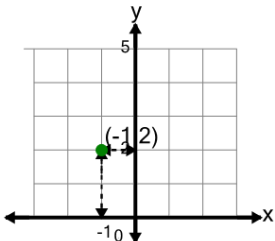
What does the value 1 in the point's coordinate mean?



- a x is equal to -1
- b x is equal to 1
- c y is equal to 1
- d y is equal to -1

6

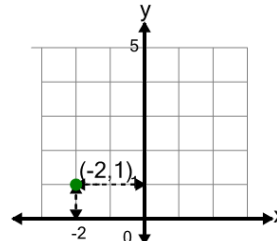
What does the value -1 in the point's coordinate mean?



- a x is equal to 1
- b y is equal to -1
- c y is equal to 1
- d x is equal to -1

7

What does the value 1 in the point's coordinate mean?



- a y is equal to 1
- b x is equal to 1
- c x is equal to -1
- d y is equal to -1