

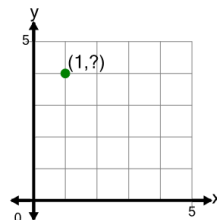


Math worksheet on 'Cartesian Grid - Points (one dimension only) (no indicator) (Level 1)'. Part of a broader unit on 'Cartesian Grid Foundations'

Learn online: app.mobius.academy/math/units/cartesian_grid_foundations/

1

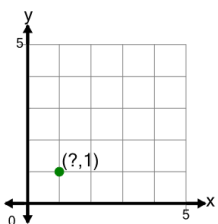
Identify the y value of the point's coordinates



| | | | |
|----------|---|----------|---|
| a | 7 | b | 6 |
| c | 1 | d | 4 |
| e | 5 | f | 8 |

2

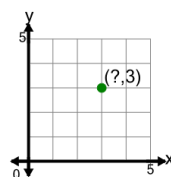
Identify the x value of the point's coordinates



| | | | |
|----------|---|----------|---|
| a | 2 | b | 0 |
| c | 4 | d | 3 |
| e | 1 | f | 5 |

3

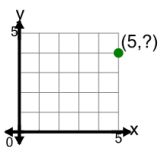
Identify the x value of the point's coordinates



| | | | |
|----------|---|----------|---|
| a | 7 | b | 5 |
| c | 0 | d | 3 |
| e | 6 | f | 1 |

4

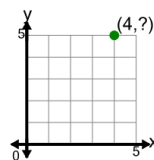
Identify the y value of the point's coordinates



| | | | |
|----------|---|----------|---|
| a | 4 | b | 7 |
| c | 5 | d | 2 |
| e | 3 | f | 1 |

5

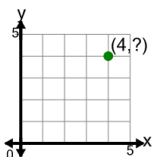
Identify the y value of the point's coordinates



| | | | |
|----------|---|----------|---|
| a | 8 | b | 3 |
| c | 6 | d | 5 |
| e | 9 | f | 2 |

6

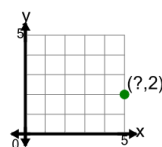
Identify the y value of the point's coordinates



| | | | |
|----------|---|----------|---|
| a | 6 | b | 8 |
| c | 3 | d | 2 |
| e | 1 | f | 4 |

7

Identify the x value of the point's coordinates



| | | | |
|----------|---|----------|---|
| a | 5 | b | 2 |
| c | 7 | d | 3 |
| e | 8 | f | 6 |