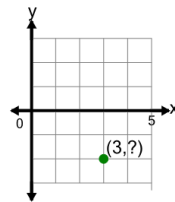




Math worksheet on 'Cartesian Grid - Points (one dimension only) (no indicator) (Level 2)'. Part of a broader unit on 'Cartesian Grid Foundations'

Learn online: app.mobius.academy/math/units/cartesian_grid_foundations/

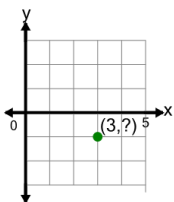
1



Identify the y value of the point's coordinates

a	3	b	1
c	2	d	-2
e	4	f	5

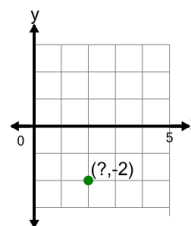
2



Identify the y value of the point's coordinates

a	0	b	-1
c	3	d	2
e	1	f	4

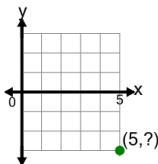
3



Identify the x value of the point's coordinates

a	4	b	6
c	0	d	1
e	2	f	3

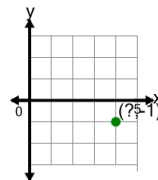
4



Identify the y value of the point's coordinates

a	5	b	-3
c	4	d	2
e	1	f	0

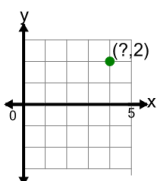
5



Identify the x value of the point's coordinates

a	1	b	8
c	4	d	7
e	3	f	6

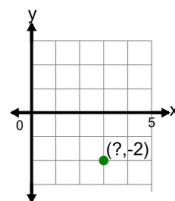
6



Identify the x value of the point's coordinates

a	7	b	3
c	2	d	4
e	6	f	1

7



Identify the x value of the point's coordinates

a	1	b	4
c	0	d	2
e	7	f	3