

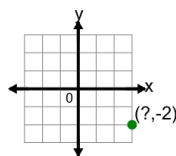


Math worksheet on 'Cartesian Grid - Points (one dimension only) (no indicator) (Level 4)'. Part of a broader unit on 'Cartesian Grid Foundations'

Learn online: [app.mobius.academy/math/units/cartesian\\_grid\\_foundations/](http://app.mobius.academy/math/units/cartesian_grid_foundations/)

1

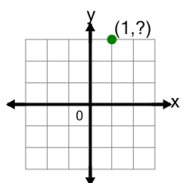
Identify the x value of the point's coordinates



|          |   |          |   |
|----------|---|----------|---|
| <b>a</b> | 6 | <b>b</b> | 3 |
| <b>c</b> | 7 | <b>d</b> | 2 |
| <b>e</b> | 0 | <b>f</b> | 1 |

2

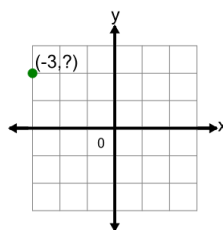
Identify the y value of the point's coordinates



|          |   |          |   |
|----------|---|----------|---|
| <b>a</b> | 3 | <b>b</b> | 4 |
| <b>c</b> | 0 | <b>d</b> | 2 |
| <b>e</b> | 7 | <b>f</b> | 6 |

3

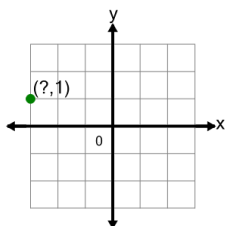
Identify the y value of the point's coordinates



|          |   |          |   |
|----------|---|----------|---|
| <b>a</b> | 2 | <b>b</b> | 5 |
| <b>c</b> | 1 | <b>d</b> | 4 |
| <b>e</b> | 0 | <b>f</b> | 6 |

4

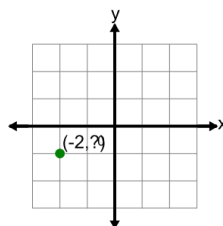
Identify the x value of the point's coordinates



|          |    |          |   |
|----------|----|----------|---|
| <b>a</b> | 1  | <b>b</b> | 5 |
| <b>c</b> | -3 | <b>d</b> | 2 |
| <b>e</b> | 6  | <b>f</b> | 0 |

5

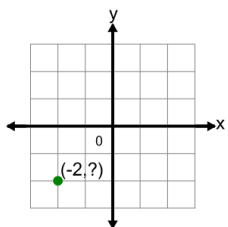
Identify the y value of the point's coordinates



|          |   |          |    |
|----------|---|----------|----|
| <b>a</b> | 0 | <b>b</b> | -1 |
| <b>c</b> | 4 | <b>d</b> | 3  |
| <b>e</b> | 1 | <b>f</b> | 2  |

6

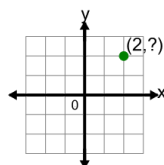
Identify the y value of the point's coordinates



|          |   |          |    |
|----------|---|----------|----|
| <b>a</b> | 5 | <b>b</b> | 4  |
| <b>c</b> | 2 | <b>d</b> | -2 |
| <b>e</b> | 1 | <b>f</b> | 0  |

7

Identify the y value of the point's coordinates



|          |   |          |   |
|----------|---|----------|---|
| <b>a</b> | 5 | <b>b</b> | 2 |
| <b>c</b> | 4 | <b>d</b> | 0 |
| <b>e</b> | 3 | <b>f</b> | 1 |