

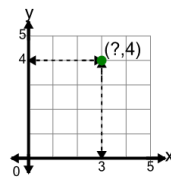


Math worksheet on 'Cartesian Grid - Points (one dimension only) (indicator) (Level 1)'. Part of a broader unit on 'Cartesian Grid Foundations'

Learn online: [app.mobius.academy/math/units/cartesian\\_grid\\_foundations/](http://app.mobius.academy/math/units/cartesian_grid_foundations/)

1

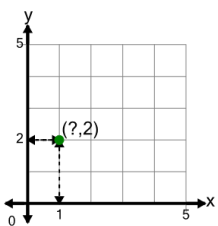
Identify the x value of the point's coordinates



<b>a</b>	6	<b>b</b>	5
<b>c</b>	4	<b>d</b>	0
<b>e</b>	1	<b>f</b>	3

2

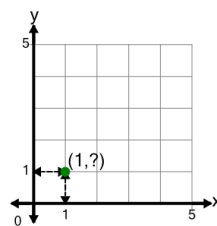
Identify the x value of the point's coordinates



<b>a</b>	2	<b>b</b>	3
<b>c</b>	1	<b>d</b>	0
<b>e</b>	4	<b>f</b>	5

3

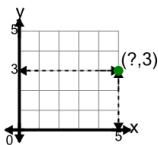
Identify the y value of the point's coordinates



<b>a</b>	3	<b>b</b>	1
<b>c</b>	5	<b>d</b>	2
<b>e</b>	4		

4

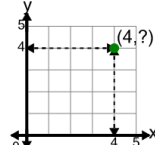
Identify the x value of the point's coordinates



<b>a</b>	9	<b>b</b>	7
<b>c</b>	8	<b>d</b>	4
<b>e</b>	5	<b>f</b>	3

5

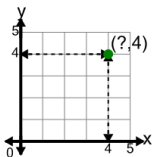
Identify the y value of the point's coordinates



<b>a</b>	6	<b>b</b>	5
<b>c</b>	4	<b>d</b>	2
<b>e</b>	8	<b>f</b>	1

6

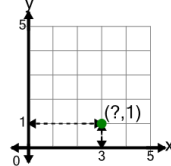
Identify the x value of the point's coordinates



<b>a</b>	3	<b>b</b>	1
<b>c</b>	8	<b>d</b>	5
<b>e</b>	4	<b>f</b>	2

7

Identify the x value of the point's coordinates



<b>a</b>	3	<b>b</b>	6
<b>c</b>	0	<b>d</b>	5
<b>e</b>	2	<b>f</b>	4