

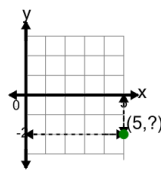


Math worksheet on 'Cartesian Grid - Points (one dimension only) (indicator) (Level 2)'. Part of a broader unit on 'Cartesian Grid Foundations'

Learn online: app.mobius.academy/math/units/cartesian_grid_foundations/

1

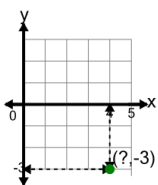
Identify the y value of the point's coordinates



a	3	b	1
c	4	d	-2
e	2	f	5

2

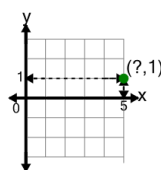
Identify the x value of the point's coordinates



a	4	b	3
c	7	d	8
e	2	f	1

3

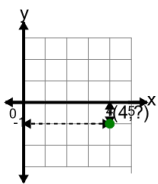
Identify the x value of the point's coordinates



a	5	b	8
c	3	d	9
e	2	f	4

4

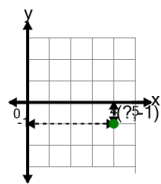
Identify the y value of the point's coordinates



a	-1	b	1
c	2	d	0
e	3		

5

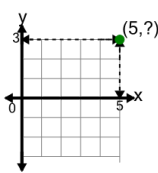
Identify the x value of the point's coordinates



a	7	b	3
c	4	d	1
e	8	f	2

6

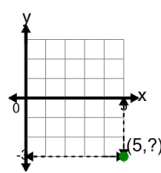
Identify the y value of the point's coordinates



a	1	b	4
c	2	d	6
e	3	f	0

7

Identify the y value of the point's coordinates



a	5	b	2
c	-3	d	1
e	0	f	6