

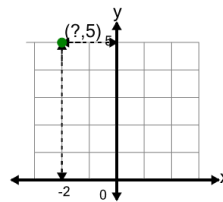


Math worksheet on 'Cartesian Grid - Points (one dimension only) (indicator) (Level 3)'. Part of a broader unit on 'Cartesian Grid Foundations'

Learn online: app.mobius.academy/math/units/cartesian_grid_foundations/

1

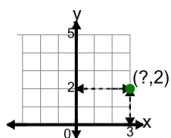
Identify the x value of the point's coordinates



a	-2	b	4
c	1	d	2
e	5	f	0

2

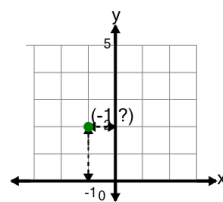
Identify the x value of the point's coordinates



a	7	b	1
c	3	d	0
e	5	f	4

3

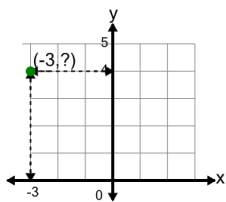
Identify the y value of the point's coordinates



a	2	b	5
c	0	d	4
e	1	f	6

4

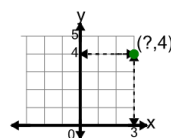
Identify the y value of the point's coordinates



a	2	b	6
c	8	d	7
e	4	f	5

5

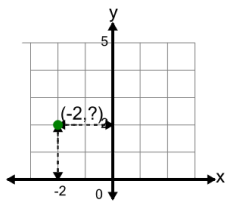
Identify the x value of the point's coordinates



a	4	b	6
c	0	d	3
e	1	f	2

6

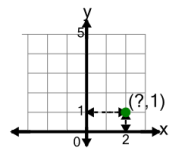
Identify the y value of the point's coordinates



a	2	b	0
c	1	d	5
e	6	f	3

7

Identify the x value of the point's coordinates



a	0	b	2
c	3	d	4
e	6	f	1