

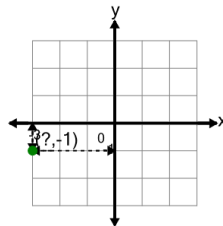


Math worksheet on 'Cartesian Grid - Points (one dimension only) (indicator) (Level 4)'. Part of a broader unit on 'Cartesian Grid Foundations'

Learn online: app.mobius.academy/math/units/cartesian_grid_foundations/

1

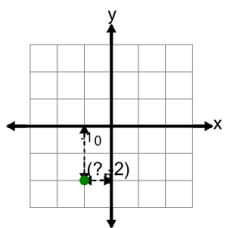
Identify the x value of the point's coordinates



a	6	b	5
c	1	d	-3
e	3	f	2

2

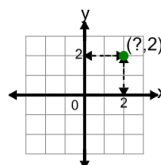
Identify the x value of the point's coordinates



a	4	b	3
c	-1	d	2
e	0	f	1

3

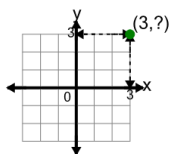
Identify the x value of the point's coordinates



a	2	b	0
c	1	d	6
e	5	f	4

4

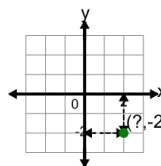
Identify the y value of the point's coordinates



a	3	b	7
c	2	d	1
e	4	f	0

5

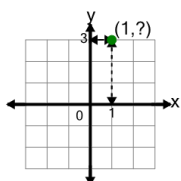
Identify the x value of the point's coordinates



a	6	b	1
c	0	d	2
e	3	f	5

6

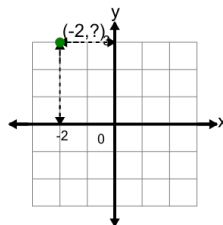
Identify the y value of the point's coordinates



a	0	b	7
c	2	d	3
e	1	f	5

7

Identify the y value of the point's coordinates



a	2	b	0
c	4	d	5
e	3	f	7