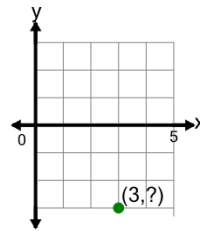




Math worksheet on 'Cartesian Grid - Points (one dimension to complete coordinates) (no indicator) (Level 2)'. Part of a broader unit on 'Cartesian Grid Foundations'

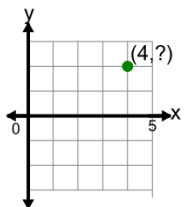
Learn online: [app.mobius.academy/math/units/cartesian\\_grid\\_foundations/](http://app.mobius.academy/math/units/cartesian_grid_foundations/)

**1** Complete the coordinates of the point by identifying the y value



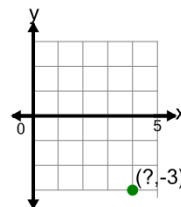
- |          |         |          |        |
|----------|---------|----------|--------|
| <b>a</b> | (-3,-3) | <b>b</b> | (3,-2) |
| <b>c</b> | (4,-3)  | <b>d</b> | (3,-3) |
| <b>e</b> | (-3,3)  | <b>f</b> | (3,3)  |

**2** Complete the coordinates of the point by identifying the y value



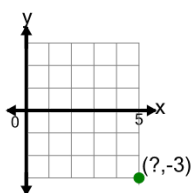
- |          |        |          |        |
|----------|--------|----------|--------|
| <b>a</b> | (-2,4) | <b>b</b> | (4,3)  |
| <b>c</b> | (-4,2) | <b>d</b> | (4,2)  |
| <b>e</b> | (5,2)  | <b>f</b> | (2,-4) |

**3** Complete the coordinates of the point by identifying the x value



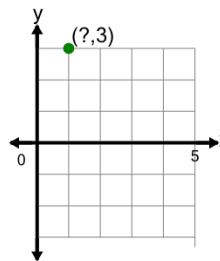
- |          |        |          |         |
|----------|--------|----------|---------|
| <b>a</b> | (4,-2) | <b>b</b> | (-4,-3) |
| <b>c</b> | (4,-3) | <b>d</b> | (3,4)   |
| <b>e</b> | (4,3)  | <b>f</b> | (-3,-4) |

**4** Complete the coordinates of the point by identifying the x value



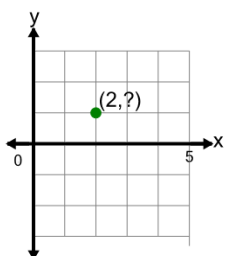
- |          |         |          |        |
|----------|---------|----------|--------|
| <b>a</b> | (5,-2)  | <b>b</b> | (-3,5) |
| <b>c</b> | (-3,-5) | <b>d</b> | (5,-3) |
| <b>e</b> | (6,-3)  | <b>f</b> | (5,3)  |

**5** Complete the coordinates of the point by identifying the x value



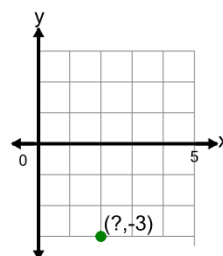
- |          |       |          |        |
|----------|-------|----------|--------|
| <b>a</b> | (1,3) | <b>b</b> | (3,-1) |
| <b>c</b> | (2,3) | <b>d</b> | (1,-3) |
| <b>e</b> | (1,4) | <b>f</b> | (-3,1) |

**6** Complete the coordinates of the point by identifying the y value



- |          |        |          |        |
|----------|--------|----------|--------|
| <b>a</b> | (-2,1) | <b>b</b> | (-1,2) |
| <b>c</b> | (1,2)  | <b>d</b> | (3,1)  |
| <b>e</b> | (1,-2) | <b>f</b> | (2,1)  |

**7** Complete the coordinates of the point by identifying the x value



- |          |         |          |         |
|----------|---------|----------|---------|
| <b>a</b> | (2,-2)  | <b>b</b> | (3,2)   |
| <b>c</b> | (-3,-2) | <b>d</b> | (2,-3)  |
| <b>e</b> | (3,-3)  | <b>f</b> | (-2,-3) |