

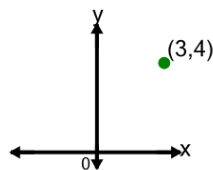


Math worksheet on 'Cartesian Grid - Meaning of Y Coordinate (no grid) (Level 3)'. Part of a broader unit on 'Cartesian Grid Foundations'

Learn online: [app.mobius.academy/math/units/cartesian\\_grid\\_foundations/](http://app.mobius.academy/math/units/cartesian_grid_foundations/)

1

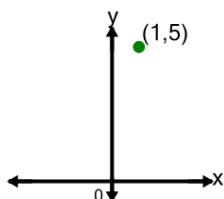
What does the value 4 in the point's coordinate mean?



- a y is equal to -4
- b x is equal to -4
- c x is equal to 4
- d y is equal to 4

2

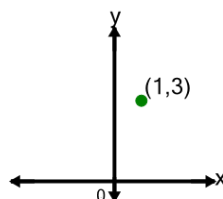
What does the value 5 in the point's coordinate mean?



- a y is equal to 5
- b y is equal to -5
- c x is equal to 5
- d x is equal to -5

3

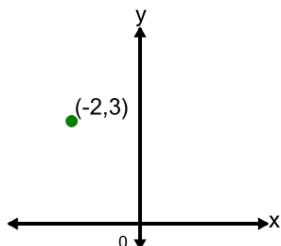
What does the value 3 in the point's coordinate mean?



- a y is equal to -3
- b x is equal to -3
- c x is equal to 3
- d y is equal to 3

4

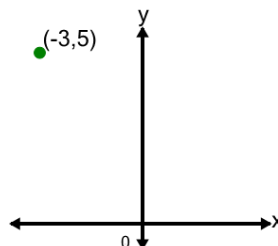
What does the value 3 in the point's coordinate mean?



- a y is equal to -3
- b y is equal to 3
- c x is equal to -3
- d x is equal to 3

5

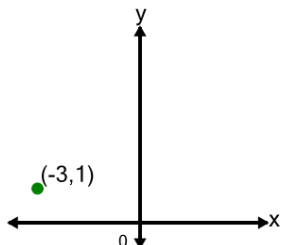
What does the value 5 in the point's coordinate mean?



- a x is equal to 5
- b x is equal to -5
- c y is equal to 5
- d y is equal to -5

6

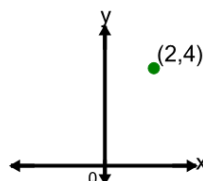
What does the value 1 in the point's coordinate mean?



- a x is equal to 1
- b y is equal to -1
- c y is equal to 1
- d x is equal to -1

7

What does the value 4 in the point's coordinate mean?



- a x is equal to -4
- b x is equal to 4
- c y is equal to -4
- d y is equal to 4