

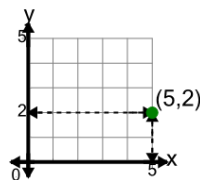


Math worksheet on 'Cartesian Grid - Meaning of Y Coordinate (indicator) (Level 1)'. Part of a broader unit on 'Cartesian Grid Foundations'

Learn online: [app.mobius.academy/math/units/cartesian\\_grid\\_foundations/](http://app.mobius.academy/math/units/cartesian_grid_foundations/)

1

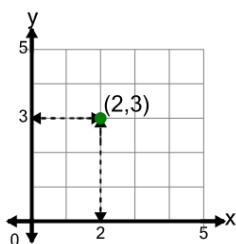
What does the value 2 in the point's coordinate mean?



- a** x is equal to -2
- b** y is equal to -2
- c** x is equal to 2
- d** y is equal to 2

2

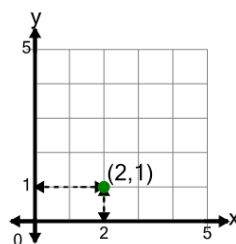
What does the value 3 in the point's coordinate mean?



- a** x is equal to -3
- b** x is equal to 3
- c** y is equal to 3
- d** y is equal to -3

3

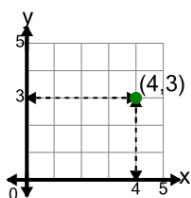
What does the value 1 in the point's coordinate mean?



- a** y is equal to 1
- b** x is equal to -1
- c** x is equal to 1
- d** y is equal to -1

4

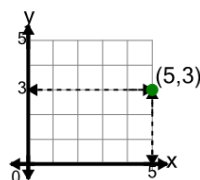
What does the value 3 in the point's coordinate mean?



- a** y is equal to 3
- b** y is equal to -3
- c** x is equal to 3
- d** x is equal to -3

5

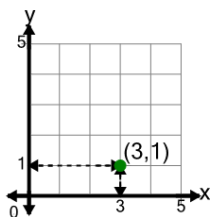
What does the value 3 in the point's coordinate mean?



- a** y is equal to 3
- b** x is equal to -3
- c** x is equal to 3
- d** y is equal to -3

6

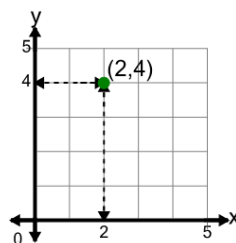
What does the value 1 in the point's coordinate mean?



- a** y is equal to -1
- b** y is equal to 1
- c** x is equal to 1
- d** x is equal to -1

7

What does the value 4 in the point's coordinate mean?



- a** y is equal to 4
- b** y is equal to -4
- c** x is equal to 4
- d** x is equal to -4