

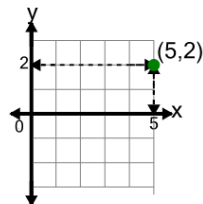


Math worksheet on 'Cartesian Grid - Meaning of Y Coordinate (indicator) (Level 2)'. Part of a broader unit on 'Cartesian Grid Foundations'

Learn online: app.mobius.academy/math/units/cartesian_grid_foundations/

1

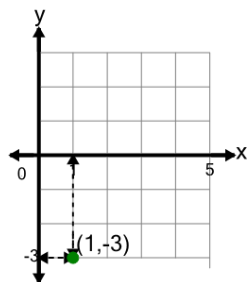
What does the value 2 in the point's coordinate mean?



- a** y is equal to -2
- b** y is equal to 2
- c** x is equal to 2
- d** x is equal to -2

2

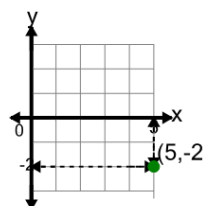
What does the value -3 in the point's coordinate mean?



- a** x is equal to 3
- b** x is equal to -3
- c** y is equal to -3
- d** y is equal to 3

3

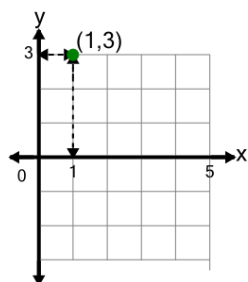
What does the value -2 in the point's coordinate mean?



- a** x is equal to -2
- b** y is equal to 2
- c** x is equal to 2
- d** y is equal to -2

4

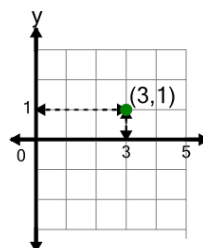
What does the value 3 in the point's coordinate mean?



- a** y is equal to -3
- b** y is equal to 3
- c** x is equal to 3
- d** x is equal to -3

5

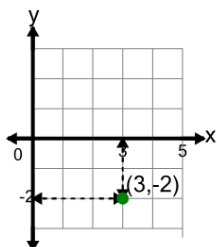
What does the value 1 in the point's coordinate mean?



- a** y is equal to -1
- b** y is equal to 1
- c** x is equal to 1
- d** x is equal to -1

6

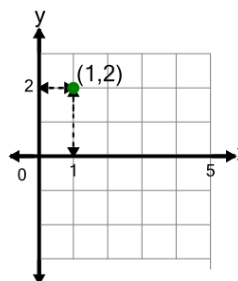
What does the value -2 in the point's coordinate mean?



- a** y is equal to -2
- b** y is equal to 2
- c** x is equal to -2
- d** x is equal to 2

7

What does the value 2 in the point's coordinate mean?



- a** x is equal to -2
- b** x is equal to 2
- c** y is equal to -2
- d** y is equal to 2