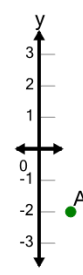




Math worksheet on 'Cartesian Grid - Y Coordinate number line (no indicator) (Level 2)'. Part of a broader unit on 'Cartesian Grid Foundations'

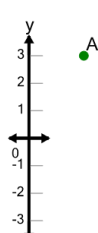
Learn online: app.mobius.academy/math/units/cartesian_grid_foundations/

1 What is the value of 'y' for this point labelled 'A'?



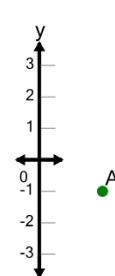
a $y = -5$	b $y = -3$
c $y = -4$	d $y = -2$
e $y = 0$	f $y = 1$

2 What is the value of 'y' for this point labelled 'A'?



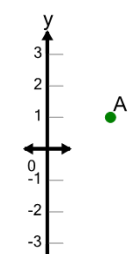
a $y = 2$	b $y = 4$
c $y = 0$	d $y = 3$
e $y = 5$	f $y = 1$

3 What is the value of 'y' for this point labelled 'A'?



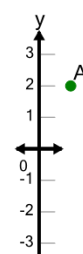
a $y = -4$	b $y = 1$
c $y = -1$	d $y = -3$
e $y = 2$	f $y = 0$

4 What is the value of 'y' for this point labelled 'A'?



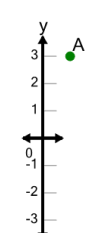
a $y = -1$	b $y = 1$
c $y = 2$	d $y = 0$
e $y = -2$	f $y = 3$

5 What is the value of 'y' for this point labelled 'A'?



a $y = 5$	b $y = 2$
c $y = -1$	d $y = 4$
e $y = 3$	f $y = 1$

6 What is the value of 'y' for this point labelled 'A'?



a $y = 6$	b $y = 3$
c $y = 5$	d $y = 4$
e $y = 1$	f $y = 0$