

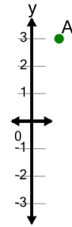


Math worksheet on 'Cartesian Grid - Y Coordinate number line (no indicator) (Level 4)'. Part of a broader unit on 'Cartesian Grid Foundations'

Learn online: app.mobius.academy/math/units/cartesian_grid_foundations/

1

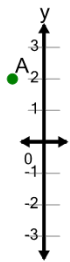
What is the value of 'y' for this point labelled 'A'?



a	$y = 3$	b	$y = 0$
c	$y = 4$	d	$y = 2$
e	$y = 6$	f	$y = 5$

2

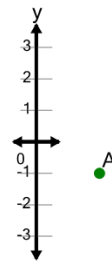
What is the value of 'y' for this point labelled 'A'?



a	$y = 0$	b	$y = 2$
c	$y = 3$	d	$y = 5$
e	$y = -1$	f	$y = 1$

3

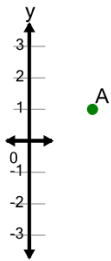
What is the value of 'y' for this point labelled 'A'?



a	$y = -1$	b	$y = -2$
c	$y = -4$	d	$y = 2$
e	$y = 0$	f	$y = 1$

4

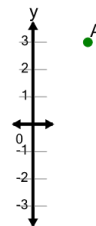
What is the value of 'y' for this point labelled 'A'?



a	$y = 3$	b	$y = 1$
c	$y = -1$	d	$y = -2$
e	$y = 4$	f	$y = 2$

5

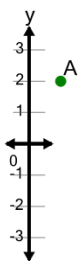
What is the value of 'y' for this point labelled 'A'?



a	$y = 5$	b	$y = 2$
c	$y = 4$	d	$y = 3$
e	$y = 6$	f	$y = 0$

6

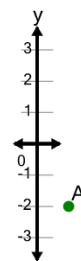
What is the value of 'y' for this point labelled 'A'?



a	$y = 1$	b	$y = 4$
c	$y = 0$	d	$y = -1$
e	$y = 2$	f	$y = 5$

7

What is the value of 'y' for this point labelled 'A'?



a	$y = -3$	b	$y = -1$
c	$y = -2$	d	$y = 0$
e	$y = -5$	f	$y = -4$