

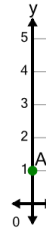


Math worksheet on 'Cartesian Grid - Y Coordinate number line (on axis, just number) (Level 1)'. Part of a broader unit on 'Cartesian Grid Foundations'

Learn online: app.mobius.academy/math/units/cartesian_grid_foundations/

1

What is the value of 'y' for this point labelled 'A'?



a	0	b	-2
c	-1	d	4
e	2	f	1

2

What is the value of 'y' for this point labelled 'A'?



a	1	b	7
c	5	d	4
e	2	f	6

3

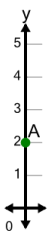
What is the value of 'y' for this point labelled 'A'?



a	5	b	1
c	3	d	2
e	6	f	4

4

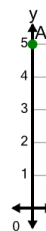
What is the value of 'y' for this point labelled 'A'?



a	5	b	4
c	1	d	2
e	0	f	3

5

What is the value of 'y' for this point labelled 'A'?



a	3	b	7
c	8	d	6
e	4	f	5