

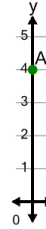


Math worksheet on 'Cartesian Grid - Y Coordinate number line (on axis, just number) (Level 3)'. Part of a broader unit on 'Cartesian Grid Foundations'

Learn online: [app.mobius.academy/math/units/cartesian\\_grid\\_foundations/](http://app.mobius.academy/math/units/cartesian_grid_foundations/)

1

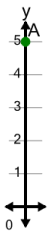
What is the value of 'y' for this point labelled 'A'?



<b>a</b>	4	<b>b</b>	6
<b>c</b>	7	<b>d</b>	3
<b>e</b>	1	<b>f</b>	2

2

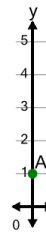
What is the value of 'y' for this point labelled 'A'?



<b>a</b>	5	<b>b</b>	7
<b>c</b>	3	<b>d</b>	6
<b>e</b>	2	<b>f</b>	8

3

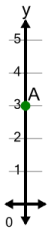
What is the value of 'y' for this point labelled 'A'?



<b>a</b>	-2	<b>b</b>	3
<b>c</b>	1	<b>d</b>	2
<b>e</b>	-1	<b>f</b>	4

4

What is the value of 'y' for this point labelled 'A'?



<b>a</b>	3	<b>b</b>	2
<b>c</b>	1	<b>d</b>	0
<b>e</b>	6	<b>f</b>	4

5

What is the value of 'y' for this point labelled 'A'?



<b>a</b>	1	<b>b</b>	4
<b>c</b>	-1	<b>d</b>	5
<b>e</b>	2	<b>f</b>	0