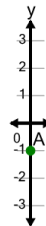




Math worksheet on 'Cartesian Grid - Y Coordinate number line (on axis, just number) (Level 4)'. Part of a broader unit on 'Cartesian Grid Foundations'

Learn online: app.mobius.academy/math/units/cartesian_grid_foundations/

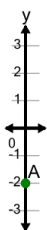
1



What is the value of 'y' for this point labelled 'A'?

a	2	b	-4
c	0	d	-3
e	1	f	-1

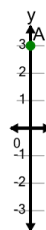
2



What is the value of 'y' for this point labelled 'A'?

a	-5	b	-3
c	-2	d	1
e	-4	f	0

3



What is the value of 'y' for this point labelled 'A'?

a	2	b	3
c	5	d	6
e	1	f	4

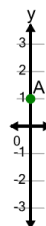
4



What is the value of 'y' for this point labelled 'A'?

a	5	b	3
c	-1	d	1
e	4	f	2

5



What is the value of 'y' for this point labelled 'A'?

a	3	b	1
c	4	d	2
e	-2	f	-1