



Math worksheet on 'Cartesian Grid - Y Coordinate number line (on axis) (Level 4)'. Part of a broader unit on 'Cartesian Grid Foundations'

Learn online: app.mobius.academy/math/units/cartesian_grid_foundations/

1 What is the value of 'y' for this point labelled 'A'?



a
 $y = -2$

b
 $y = 0$

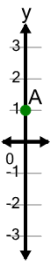
c
 $y = 1$

d
 $y = -4$

e
 $y = -1$

f
 $y = 2$

2 What is the value of 'y' for this point labelled 'A'?



a
 $y = 2$

b
 $y = 1$

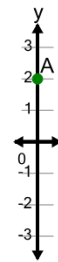
c
 $y = 0$

d
 $y = -1$

e
 $y = -2$

f
 $y = 4$

3 What is the value of 'y' for this point labelled 'A'?



a
 $y = 3$

b
 $y = 1$

c
 $y = 2$

d
 $y = 4$

e
 $y = -1$

f
 $y = 5$

4 What is the value of 'y' for this point labelled 'A'?



a
 $y = 1$

b
 $y = 0$

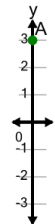
c
 $y = -4$

d
 $y = -1$

e
 $y = -2$

f
 $y = -5$

5



What is the value of 'y' for this point labelled 'A'?

a
 $y = 4$

b
 $y = 0$

c
 $y = 3$

d
 $y = 6$

e
 $y = 5$

f
 $y = 2$