

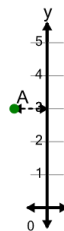


Math worksheet on 'Cartesian Grid - Y Coordinate number line (indicator) (Level 3)'. Part of a broader unit on 'Cartesian Grid Foundations'

Learn online: [app.mobius.academy/math/units/cartesian\\_grid\\_foundations/](http://app.mobius.academy/math/units/cartesian_grid_foundations/)

1

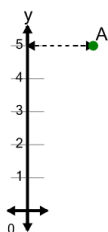
What is the value of 'y' for this point labelled 'A'?



<b>a</b>	$y = 0$	<b>b</b>	$y = 5$
<b>c</b>	$y = 2$	<b>d</b>	$y = 3$
<b>e</b>	$y = 1$	<b>f</b>	$y = 4$

2

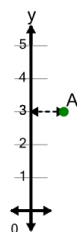
What is the value of 'y' for this point labelled 'A'?



<b>a</b>	$y = 7$	<b>b</b>	$y = 2$
<b>c</b>	$y = 3$	<b>d</b>	$y = 6$
<b>e</b>	$y = 4$	<b>f</b>	$y = 5$

3

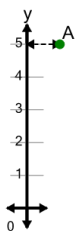
What is the value of 'y' for this point labelled 'A'?



<b>a</b>	$y = 1$	<b>b</b>	$y = 3$
<b>c</b>	$y = 5$	<b>d</b>	$y = 4$
<b>e</b>	$y = 0$	<b>f</b>	$y = 6$

4

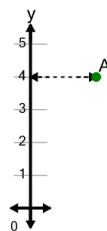
What is the value of 'y' for this point labelled 'A'?



<b>a</b>	$y = 2$	<b>b</b>	$y = 6$
<b>c</b>	$y = 8$	<b>d</b>	$y = 7$
<b>e</b>	$y = 5$	<b>f</b>	$y = 4$

5

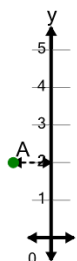
What is the value of 'y' for this point labelled 'A'?



<b>a</b>	$y = 3$	<b>b</b>	$y = 5$
<b>c</b>	$y = 7$	<b>d</b>	$y = 4$
<b>e</b>	$y = 6$	<b>f</b>	$y = 1$

6

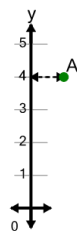
What is the value of 'y' for this point labelled 'A'?



<b>a</b>	$y = 2$	<b>b</b>	$y = 3$
<b>c</b>	$y = -1$	<b>d</b>	$y = 4$
<b>e</b>	$y = 0$	<b>f</b>	$y = 1$

7

What is the value of 'y' for this point labelled 'A'?



<b>a</b>	$y = 3$	<b>b</b>	$y = 6$
<b>c</b>	$y = 4$	<b>d</b>	$y = 1$
<b>e</b>	$y = 7$	<b>f</b>	$y = 2$