

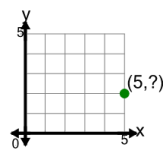


Math worksheet on 'Cartesian Grid - Points (Y only) (no indicator) (Level 1)'. Part of a broader unit on 'Cartesian Grid Foundations'

Learn online: app.mobius.academy/math/units/cartesian_grid_foundations/

1

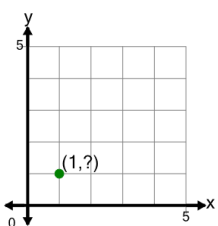
Identify the y value of the point's coordinates



a	2	b	4
c	3	d	0
e	1	f	5

2

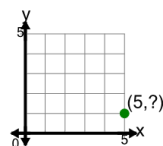
Identify the y value of the point's coordinates



a	2	b	4
c	5	d	1
e	3	f	0

3

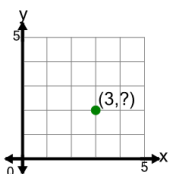
Identify the y value of the point's coordinates



a	2	b	1
c	0	d	3
e	4	f	5

4

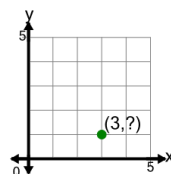
Identify the y value of the point's coordinates



a	1	b	4
c	2	d	3
e	6	f	5

5

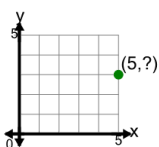
Identify the y value of the point's coordinates



a	1	b	5
c	2	d	4
e	3	f	0

6

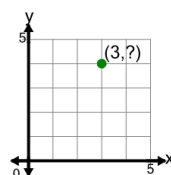
Identify the y value of the point's coordinates



a	1	b	7
c	0	d	3
e	4	f	5

7

Identify the y value of the point's coordinates



a	6	b	4
c	8	d	5
e	3	f	1