

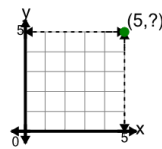


Math worksheet on 'Cartesian Grid - Points (Y only) (indicator) (Level 1)'. Part of a broader unit on 'Cartesian Grid Foundations'

Learn online: app.mobius.academy/math/units/cartesian_grid_foundations/

1

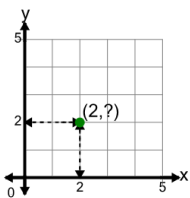
Identify the y value of the point's coordinates



a	5	b	9
c	6	d	2
e	8	f	7

2

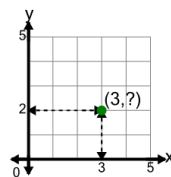
Identify the y value of the point's coordinates



a	0	b	2
c	1	d	3
e	5	f	4

3

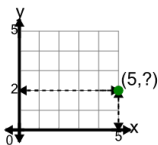
Identify the y value of the point's coordinates



a	5	b	3
c	2	d	4
e	1	f	6

4

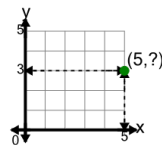
Identify the y value of the point's coordinates



a	0	b	3
c	4	d	5
e	1	f	2

5

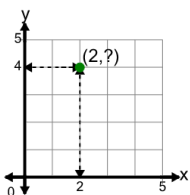
Identify the y value of the point's coordinates



a	2	b	7
c	6	d	4
e	3	f	0

6

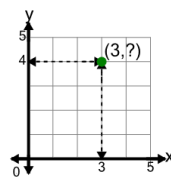
Identify the y value of the point's coordinates



a	3	b	2
c	4	d	8
e	7	f	1

7

Identify the y value of the point's coordinates



a	8	b	2
c	1	d	4
e	5	f	3