

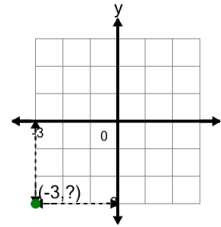


Math worksheet on 'Cartesian Grid - Points (Y only) (indicator) (Level 4)'. Part of a broader unit on 'Cartesian Grid Foundations'

Learn online: app.mobius.academy/math/units/cartesian_grid_foundations/

1

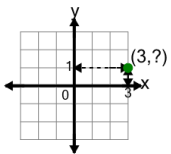
Identify the y value of the point's coordinates



a	4	b	6
c	1	d	3
e	0	f	-3

2

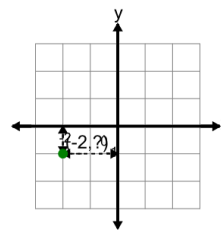
Identify the y value of the point's coordinates



a	2	b	1
c	5	d	4
e	0		

3

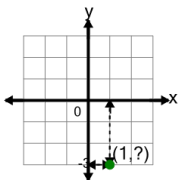
Identify the y value of the point's coordinates



a	2	b	4
c	-1	d	3
e	0	f	1

4

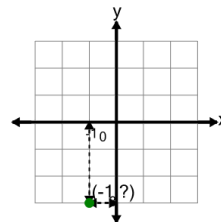
Identify the y value of the point's coordinates



a	2	b	1
c	4	d	3
e	5	f	-3

5

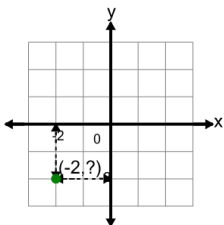
Identify the y value of the point's coordinates



a	2	b	0
c	1	d	3
e	4	f	-3

6

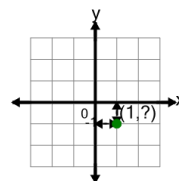
Identify the y value of the point's coordinates



a	4	b	-2
c	2	d	0
e	1	f	3

7

Identify the y value of the point's coordinates



a	0	b	-1
c	1	d	2
e	3	f	4