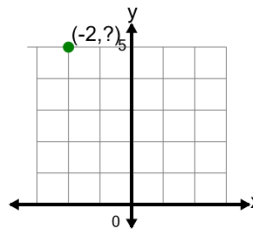




Math worksheet on 'Cartesian Grid - Points (Y to complete coordinates) (no indicator) (Level 3)'. Part of a broader unit on 'Cartesian Grid Foundations'

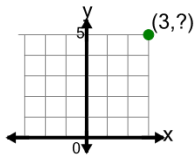
Learn online: [app.mobius.academy/math/units/cartesian\\_grid\\_foundations/](http://app.mobius.academy/math/units/cartesian_grid_foundations/)

**1** Complete the coordinates of the point by identifying the y value



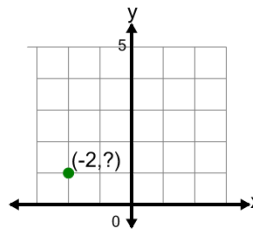
- |          |         |          |        |
|----------|---------|----------|--------|
| <b>a</b> | (5,-2)  | <b>b</b> | (-1,5) |
| <b>c</b> | (-5,-2) | <b>d</b> | (-2,5) |
| <b>e</b> | (-2,-5) | <b>f</b> | (5,2)  |

**2** Complete the coordinates of the point by identifying the y value



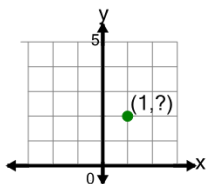
- |          |        |          |        |
|----------|--------|----------|--------|
| <b>a</b> | (3,5)  | <b>b</b> | (3,6)  |
| <b>c</b> | (5,3)  | <b>d</b> | (5,-3) |
| <b>e</b> | (3,-5) | <b>f</b> | (-5,3) |

**3** Complete the coordinates of the point by identifying the y value



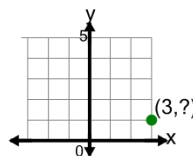
- |          |        |          |         |
|----------|--------|----------|---------|
| <b>a</b> | (1,-2) | <b>b</b> | (1,2)   |
| <b>c</b> | (-1,1) | <b>d</b> | (-2,2)  |
| <b>e</b> | (-2,1) | <b>f</b> | (-2,-1) |

**4** Complete the coordinates of the point by identifying the y value



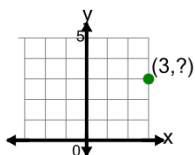
- |          |        |          |        |
|----------|--------|----------|--------|
| <b>a</b> | (-2,1) | <b>b</b> | (1,2)  |
| <b>c</b> | (2,-1) | <b>d</b> | (-1,2) |
| <b>e</b> | (2,1)  | <b>f</b> | (1,-2) |

**5** Complete the coordinates of the point by identifying the y value



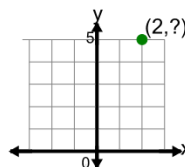
- |          |        |          |        |
|----------|--------|----------|--------|
| <b>a</b> | (-3,1) | <b>b</b> | (3,1)  |
| <b>c</b> | (1,3)  | <b>d</b> | (3,-1) |
| <b>e</b> | (3,2)  | <b>f</b> | (1,-3) |

**6** Complete the coordinates of the point by identifying the y value



- |          |        |          |       |
|----------|--------|----------|-------|
| <b>a</b> | (-3,3) | <b>b</b> | (3,4) |
| <b>c</b> | (3,-3) | <b>d</b> | (4,3) |
| <b>e</b> | (3,3)  |          |       |

**7** Complete the coordinates of the point by identifying the y value



- |          |        |          |        |
|----------|--------|----------|--------|
| <b>a</b> | (-5,2) | <b>b</b> | (2,5)  |
| <b>c</b> | (3,5)  | <b>d</b> | (5,-2) |
| <b>e</b> | (2,-5) | <b>f</b> | (2,6)  |