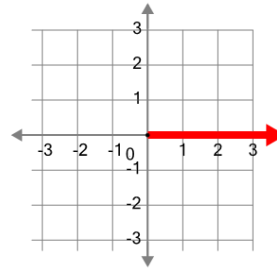




Math worksheet on 'Cartesian Grid - Axis (positive, just name) (Level 1)'. Part of a broader unit on 'Cartesian Grid Foundations'

Learn online: app.mobius.academy/math/units/cartesian_grid_foundations/

1



What is the name of the axis that is highlighted?

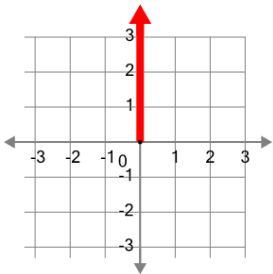
a

Y

b

X

2



What is the name of the axis that is highlighted?

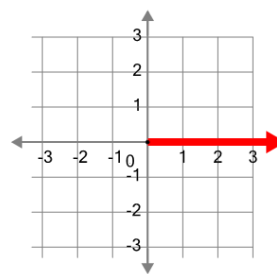
a

X

b

Y

3



What is the name of the axis that is highlighted?

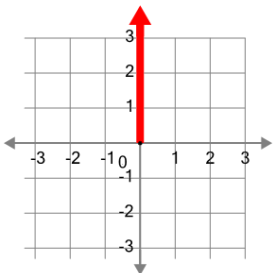
a

Y

b

X

4



What is the name of the axis that is highlighted?

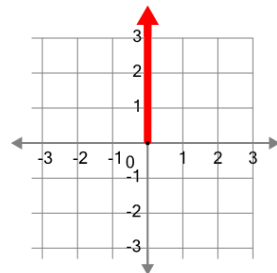
a

X

b

Y

5



What is the name of the axis that is highlighted?

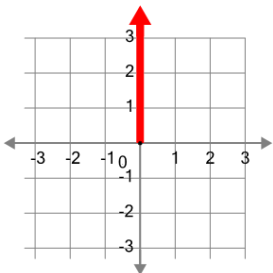
a

X

b

Y

6



What is the name of the axis that is highlighted?

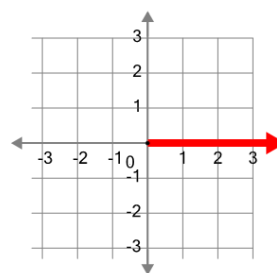
a

Y

b

X

7



What is the name of the axis that is highlighted?

a

Y

b

X