

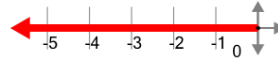


Math worksheet on 'Cartesian Grid - Axis Only (negative, just name) (Level 1)'. Part of a broader unit on 'Cartesian Grid Foundations'

Learn online: app.mobius.academy/math/units/cartesian_grid_foundations/

1

What is the name of the axis that is highlighted?




a

X

b

Y

2



What is the name of the axis that is highlighted?

a

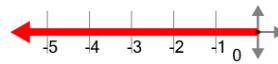
Y

b

X

3

What is the name of the axis that is highlighted?



a

Y

b

X

4



What is the name of the axis that is highlighted?

a

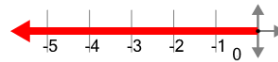
Y

b

X

5

What is the name of the axis that is highlighted?



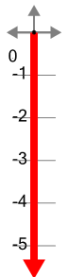
a

X

b

Y

6



What is the name of the axis that is highlighted?

a

Y

b

X

7

What is the name of the axis that is highlighted?



a

Y

b

X