



Math worksheet on 'Cartesian Grid - Axis Only (just name) (Level 1)'. Part of a broader unit on 'Cartesian Grid Foundations'

Learn online: app.mobius.academy/math/units/cartesian_grid_foundations/

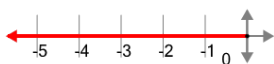
1



What is the name of the axis that is highlighted?

a	b
Y	X

2



What is the name of the axis that is highlighted?

a	b
Y	X

3



What is the name of the axis that is highlighted?

a	b
X	Y

4



What is the name of the axis that is highlighted?

a	b
X	Y

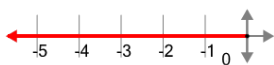
5



What is the name of the axis that is highlighted?

a	b
Y	X

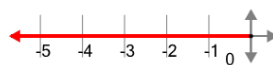
6



What is the name of the axis that is highlighted?

a	b
Y	X

7



What is the name of the axis that is highlighted?

a	b
Y	X