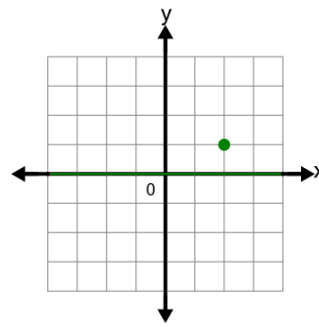




Math worksheet on 'Cartesian Grid - Reflection of Point (Grid to Grid) across Axis (Level 1)'. Part of a broader unit on 'Cartesian Grid Transformations - Intro'

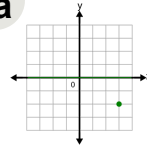
Learn online: [app.mobius.academy/math/units/cartesian\\_grid\\_transformations\\_intro/](http://app.mobius.academy/math/units/cartesian_grid_transformations_intro/)

1

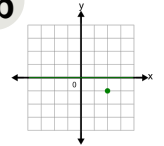


Reflect this point across the X axis

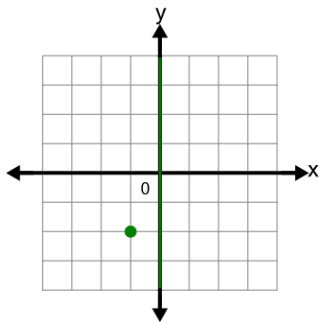
a



b

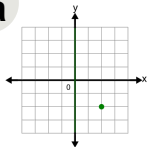


2

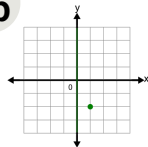


Reflect this point across the Y axis

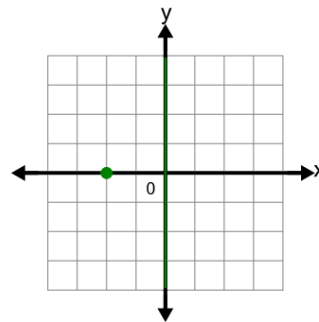
a



b

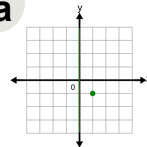


3

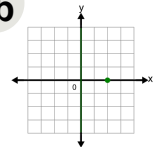


Reflect this point across the Y axis

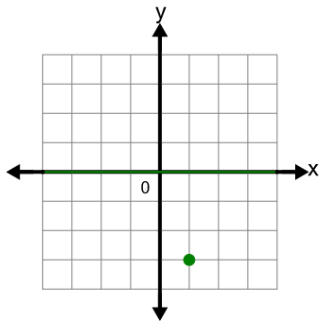
a



b

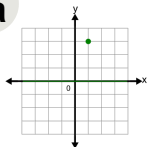


4

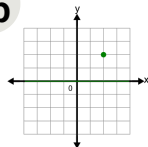


Reflect this point across the X axis

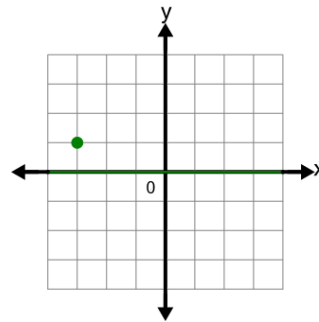
a



b

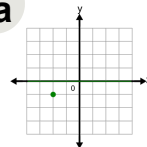


5

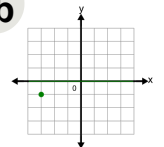


Reflect this point across the X axis

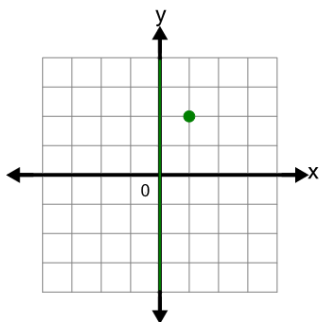
a



b

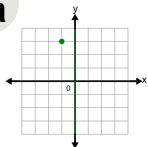


6

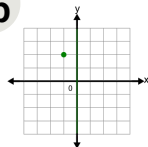


Reflect this point across the Y axis

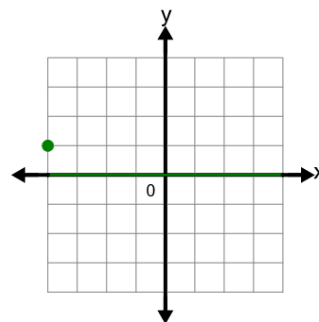
a



b

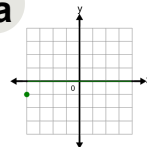


7



Reflect this point across the X axis

a



b

