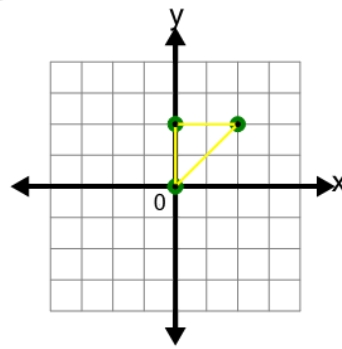




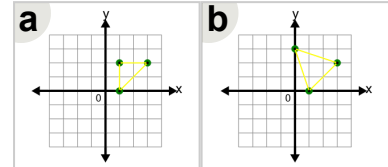
Math worksheet on 'Cartesian Grid - Translation of Shape in One Dimension (Vector) (Level 1)'. Part of a broader unit on 'Cartesian Grid Transformations - Intro'

Learn online: [app.mobius.academy/math/units/cartesian\\_grid\\_transformations\\_intro/](http://app.mobius.academy/math/units/cartesian_grid_transformations_intro/)

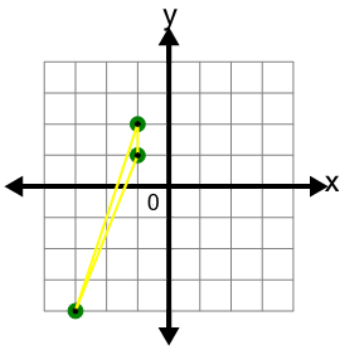
1



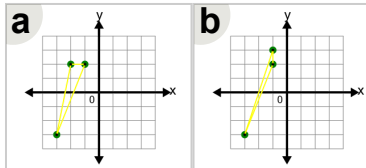
Translate this shape by  $(1,0)$



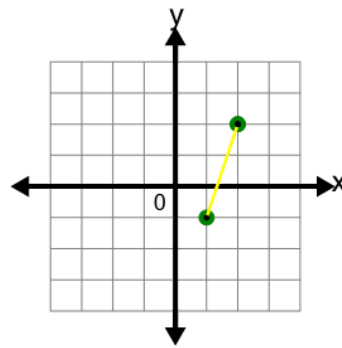
2



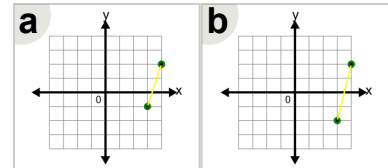
Translate this shape by  $(0,1)$



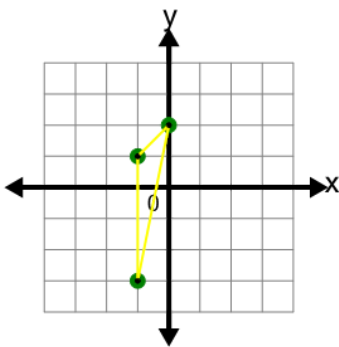
3



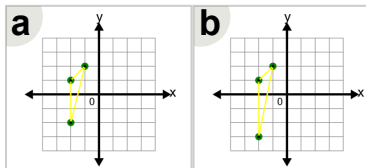
Translate this shape by  $(2,0)$



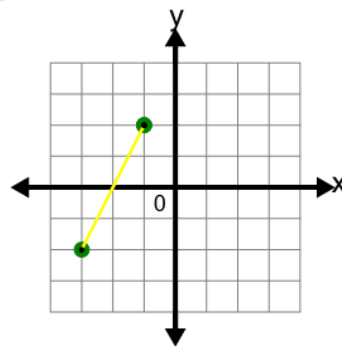
4



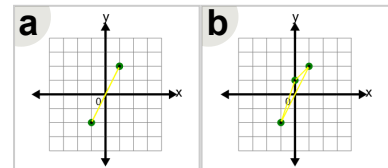
Translate this shape by  $(-1,0)$



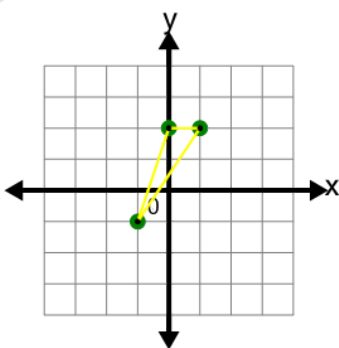
5



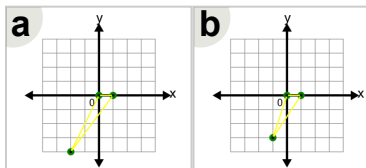
Translate this shape by  $(2,0)$



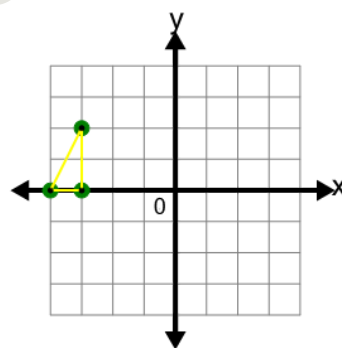
6



Translate this shape by  $(0,-2)$



7



Translate this shape by  $(2,0)$

