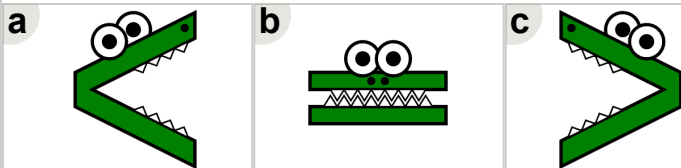
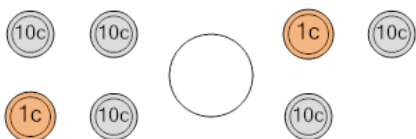




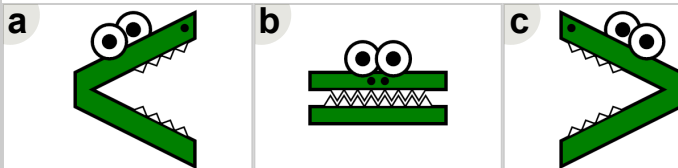
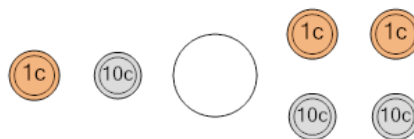
Math worksheet on 'Coin Math - Less or Greater to Alligator - Pennies, Dimes (Level 1)'. Part of a broader unit on 'Coin Math Comparing - Intro'

Learn online: [app.mobius.academy/math/units/coin\\_math\\_compare\\_intro/](http://app.mobius.academy/math/units/coin_math_compare_intro/)

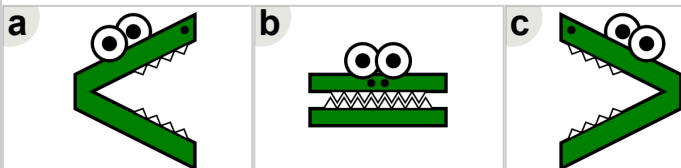
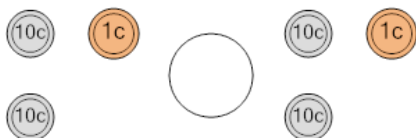
2 Which way would the alligator face to eat the coins with the largest value?



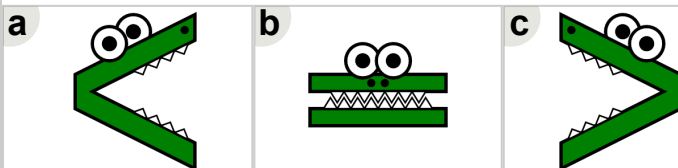
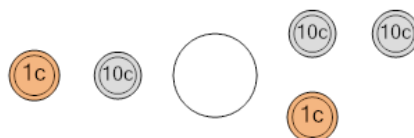
3 Which way would the alligator face to eat the coins with the largest value?



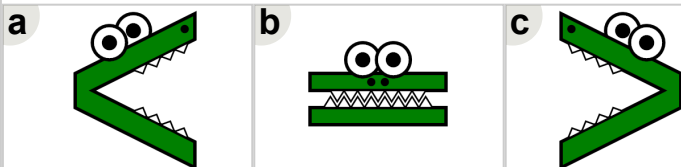
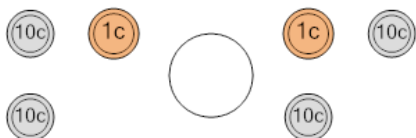
4 Which way would the alligator face to eat the coins with the largest value?



5 Which way would the alligator face to eat the coins with the largest value?



6 Which way would the alligator face to eat the coins with the largest value?



7 Which way would the alligator face to eat the coins with the largest value?

