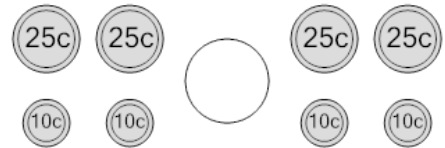




Math worksheet on 'Coin Math - Less or Greater to Symbol - Dimes, Quarters (Level 1)'. Part of a broader unit on 'Coin Math Comparing - Intro'

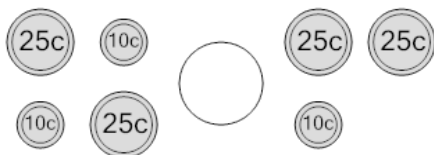
Learn online: [app.mobius.academy/math/units/coin\\_math\\_compare\\_intro/](http://app.mobius.academy/math/units/coin_math_compare_intro/)

**1** Is the value of the first group less than, greater than, or equal to the second group?



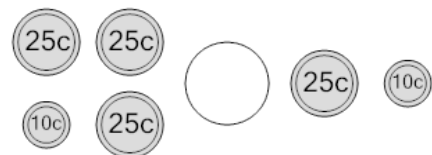
<b>a</b>	<b>b</b>	<b>c</b>
<	=	>

**2** Is the value of the first group less than, greater than, or equal to the second group?



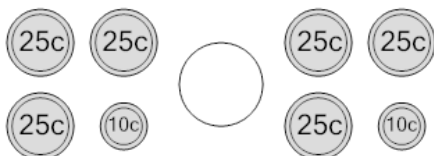
<b>a</b>	<b>b</b>	<b>c</b>
<	=	>

**3** Is the value of the first group less than, greater than, or equal to the second group?



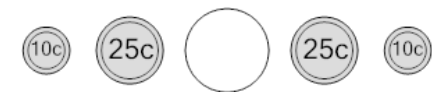
<b>a</b>	<b>b</b>	<b>c</b>
<	=	>

**4** Is the value of the first group less than, greater than, or equal to the second group?



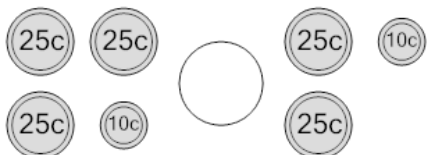
<b>a</b>	<b>b</b>	<b>c</b>
<	=	>

**5** Is the value of the first group less than, greater than, or equal to the second group?



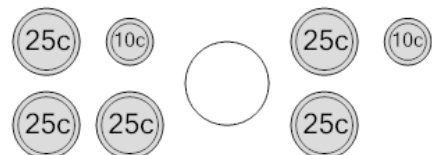
<b>a</b>	<b>b</b>	<b>c</b>
<	=	>

**6** Is the value of the first group less than, greater than, or equal to the second group?



<b>a</b>	<b>b</b>	<b>c</b>
<	=	>

**7** Is the value of the first group less than, greater than, or equal to the second group?



<b>a</b>	<b>b</b>	<b>c</b>
<	=	>