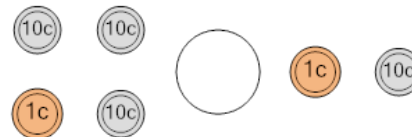




Math worksheet on 'Coin Math - Less or Greater to Symbol - Pennies, Dimes (Level 1)'. Part of a broader unit on 'Coin Math Comparing - Intro'

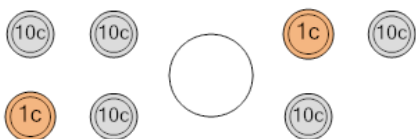
Learn online: app.mobius.academy/math/units/coin_math_compare_intro/

1 Is the value of the first group less than, greater than, or equal to the second group?



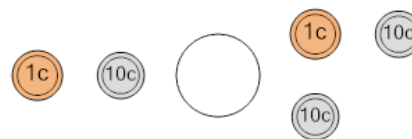
a < **b** = **c** >

2 Is the value of the first group less than, greater than, or equal to the second group?




a < **b** = **c** >

3 Is the value of the first group less than, greater than, or equal to the second group?



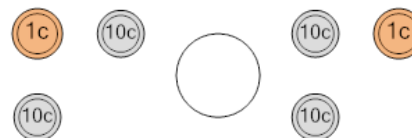
a < **b** = **c** >

4 Is the value of the first group less than, greater than, or equal to the second group?




a < **b** = **c** >

5 Is the value of the first group less than, greater than, or equal to the second group?



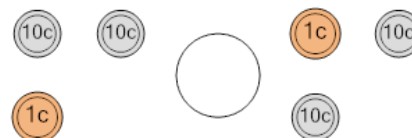
a < **b** = **c** >

6 Is the value of the first group less than, greater than, or equal to the second group?



a < **b** = **c** >

7 Is the value of the first group less than, greater than, or equal to the second group?



a < **b** = **c** >