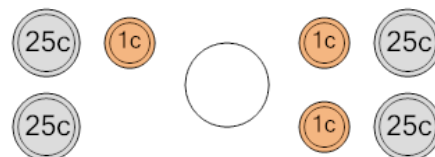




Math worksheet on 'Coin Math - Less or Greater to Symbol - Pennies, Quarters (Level 1)'. Part of a broader unit on 'Coin Math Comparing - Intro'

Learn online: app.mobius.academy/math/units/coin_math_compare_intro/

1 Is the value of the first group less than, greater than, or equal to the second group?



a

<

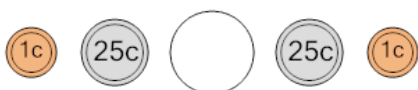
b

=

c

>

2 Is the value of the first group less than, greater than, or equal to the second group?



a

<

b

=

c

>

3 Is the value of the first group less than, greater than, or equal to the second group?



a

<

b

=

c

>

4 Is the value of the first group less than, greater than, or equal to the second group?



a

<

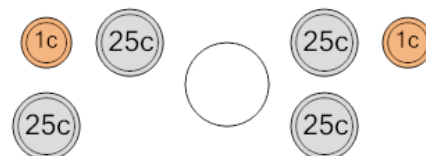
b

=

c

>

5 Is the value of the first group less than, greater than, or equal to the second group?



a

<

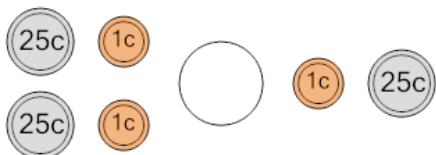
b

=

c

>

6 Is the value of the first group less than, greater than, or equal to the second group?



a

<

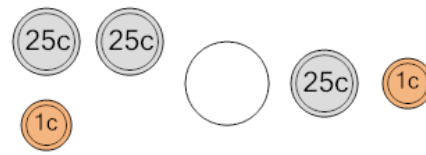
b

=

c

>

7 Is the value of the first group less than, greater than, or equal to the second group?



a

<

b

=

c

>