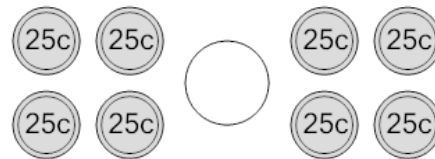




Math worksheet on 'Coin Math - Less or Greater to Symbol - Quarters (Level 1)'. Part of a broader unit on 'Coin Math Comparing - Intro'

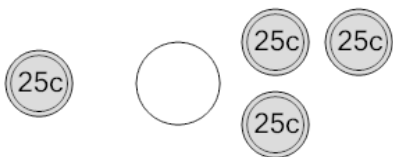
Learn online: app.mobius.academy/math/units/coin_math_compare_intro/

1 Is the value of the first group less than, greater than, or equal to the second group?



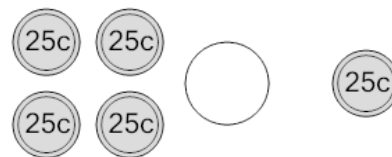
a	b	c
<	=	>

2 Is the value of the first group less than, greater than, or equal to the second group?



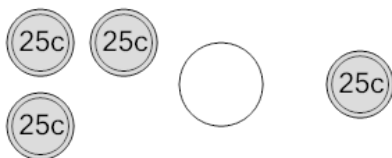
a	b	c
<	=	>

3 Is the value of the first group less than, greater than, or equal to the second group?



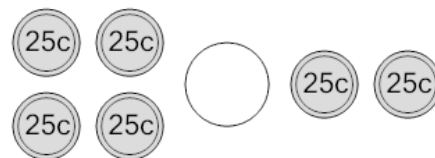
a	b	c
<	=	>

4 Is the value of the first group less than, greater than, or equal to the second group?



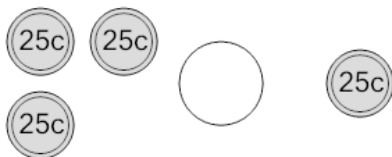
a	b	c
<	=	>

5 Is the value of the first group less than, greater than, or equal to the second group?



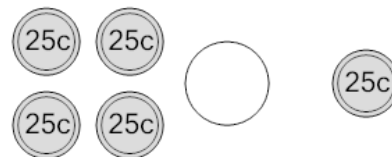
a	b	c
<	=	>

6 Is the value of the first group less than, greater than, or equal to the second group?



a	b	c
<	=	>

7 Is the value of the first group less than, greater than, or equal to the second group?



a	b	c
<	=	>