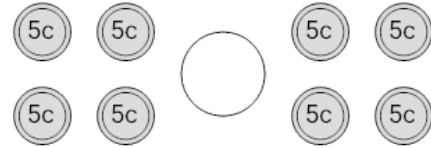




Math worksheet on 'Coin Math - Less or Greater to Words - Nickels (Level 1)'. Part of a broader unit on 'Coin Math Comparing - Intro'

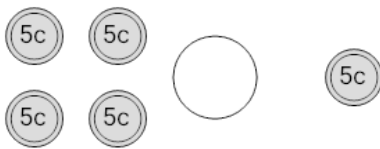
Learn online: app.mobius.academy/math/units/coin_math_compare_intro/

1 Is the value of the first group less than, greater than, or equal to the second group?



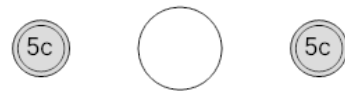
a	less	b	equals
c	greater		

2 Is the value of the first group less than, greater than, or equal to the second group?



a	less	b	equals
c	greater		

3 Is the value of the first group less than, greater than, or equal to the second group?



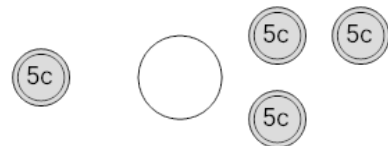
a	less	b	equals
c	greater		

4 Is the value of the first group less than, greater than, or equal to the second group?



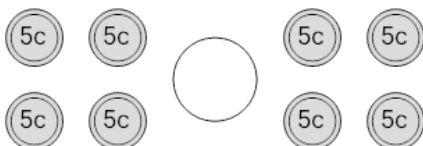
a	less	b	equals
c	greater		

5 Is the value of the first group less than, greater than, or equal to the second group?



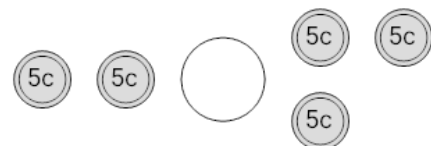
a	less	b	equals
c	greater		

6 Is the value of the first group less than, greater than, or equal to the second group?



a	less	b	equals
c	greater		

7 Is the value of the first group less than, greater than, or equal to the second group?



a	less	b	equals
c	greater		