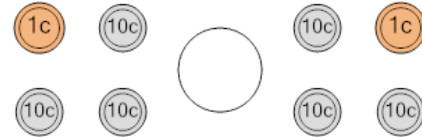




Math worksheet on 'Coin Math - Less or Greater to Words - Pennies, Dimes (Level 1)'. Part of a broader unit on 'Coin Math Comparing - Intro'

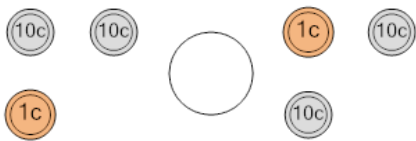
Learn online: [app.mobius.academy/math/units/coin\\_math\\_compare\\_intro/](http://app.mobius.academy/math/units/coin_math_compare_intro/)

1 Is the value of the first group less than, greater than, or equal to the second group?



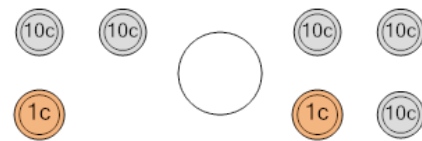
- |          |         |          |        |
|----------|---------|----------|--------|
| <b>a</b> | less    | <b>b</b> | equals |
| <b>c</b> | greater |          |        |

2 Is the value of the first group less than, greater than, or equal to the second group?



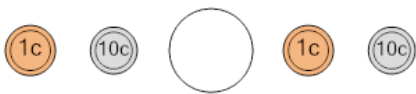
- |          |         |          |        |
|----------|---------|----------|--------|
| <b>a</b> | less    | <b>b</b> | equals |
| <b>c</b> | greater |          |        |

3 Is the value of the first group less than, greater than, or equal to the second group?



- |          |         |          |        |
|----------|---------|----------|--------|
| <b>a</b> | less    | <b>b</b> | equals |
| <b>c</b> | greater |          |        |

4 Is the value of the first group less than, greater than, or equal to the second group?




- |          |         |          |        |
|----------|---------|----------|--------|
| <b>a</b> | less    | <b>b</b> | equals |
| <b>c</b> | greater |          |        |

5 Is the value of the first group less than, greater than, or equal to the second group?




- |          |         |          |        |
|----------|---------|----------|--------|
| <b>a</b> | less    | <b>b</b> | equals |
| <b>c</b> | greater |          |        |

6 Is the value of the first group less than, greater than, or equal to the second group?



- |          |         |          |        |
|----------|---------|----------|--------|
| <b>a</b> | less    | <b>b</b> | equals |
| <b>c</b> | greater |          |        |

7 Is the value of the first group less than, greater than, or equal to the second group?



- |          |         |          |        |
|----------|---------|----------|--------|
| <b>a</b> | less    | <b>b</b> | equals |
| <b>c</b> | greater |          |        |