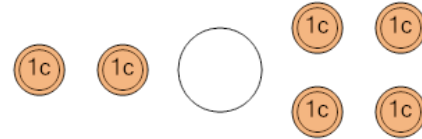




Math worksheet on 'Coin Math - Less or Greater to Words - Pennies (Level 1)'. Part of a broader unit on 'Coin Math Comparing - Intro'

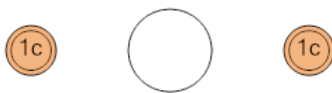
Learn online: app.mobius.academy/math/units/coin_math_compare_intro/

1 Is the value of the first group less than, greater than, or equal to the second group?



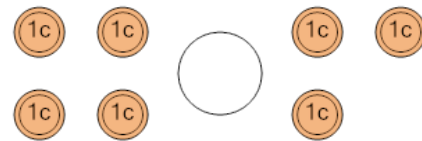
- | | | | |
|----------|---------|----------|--------|
| a | less | b | equals |
| c | greater | | |

2 Is the value of the first group less than, greater than, or equal to the second group?



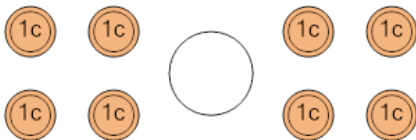
- | | | | |
|----------|---------|----------|--------|
| a | less | b | equals |
| c | greater | | |

3 Is the value of the first group less than, greater than, or equal to the second group?



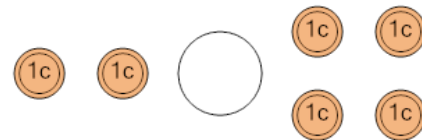
- | | | | |
|----------|---------|----------|--------|
| a | less | b | equals |
| c | greater | | |

4 Is the value of the first group less than, greater than, or equal to the second group?



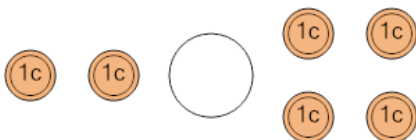
- | | | | |
|----------|---------|----------|--------|
| a | less | b | equals |
| c | greater | | |

5 Is the value of the first group less than, greater than, or equal to the second group?



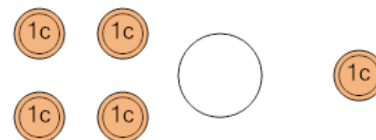
- | | | | |
|----------|---------|----------|--------|
| a | less | b | equals |
| c | greater | | |

6 Is the value of the first group less than, greater than, or equal to the second group?



- | | | | |
|----------|---------|----------|--------|
| a | less | b | equals |
| c | greater | | |

7 Is the value of the first group less than, greater than, or equal to the second group?



- | | | | |
|----------|---------|----------|--------|
| a | less | b | equals |
| c | greater | | |