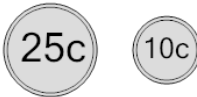




Math worksheet on 'Coin Math - Count Total - Dimes and Quarters (Level 2)'. Part of a broader unit on 'Coin Math - Practice'


Learn online: app.mobius.academy/math/units/coin_math_practice/

1 What is the total value of these coins?




a 60 cents	b 65 cents
c 10 cents	d 45 cents
e 35 cents	

2 What is the total value of these coins?



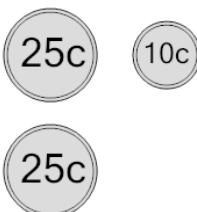
a 110 cents	b 140 cents
c 145 cents	d 95 cents
e 121 cents	f 120 cents

3 What is the total value of these coins?



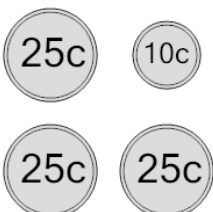
a 80 cents	b 70 cents
c 60 cents	d 76 cents
e 100 cents	f 71 cents

4 What is the total value of these coins?



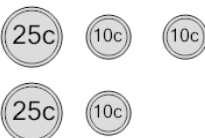
a 60 cents	b 62 cents
c 85 cents	d 35 cents
e 70 cents	f 80 cents

5 What is the total value of these coins?




a 85 cents	b 120 cents
c 86 cents	d 60 cents
e 135 cents	f 110 cents

6 What is the total value of these coins?



a 80 cents	b 90 cents
c 105 cents	d 100 cents
e 55 cents	f 70 cents

7 What is the total value of these coins?



a 90 cents	b 70 cents
c 80 cents	d 105 cents