




Math worksheet on 'Coin Math - Count Total - Dimes (Level 1)'. Part of a broader unit on 'Coin Math - Intro'


Learn online: [app.mobius.academy/math/units/coin\\_math\\_intro/](http://app.mobius.academy/math/units/coin_math_intro/)

**1** What is the total value of these coins?



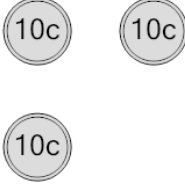
<b>a</b>	30 cents	<b>b</b>	10 cents
<b>c</b>	55 cents	<b>d</b>	20 cents
<b>e</b>	35 cents		

**2** What is the total value of these coins?




<b>a</b>	30 cents	<b>b</b>	20 cents
<b>c</b>	10 cents	<b>d</b>	12 cents

**3** What is the total value of these coins?




<b>a</b>	55 cents	<b>b</b>	30 cents
<b>c</b>	40 cents	<b>d</b>	50 cents
<b>e</b>	35 cents	<b>f</b>	31 cents

**4** What is the total value of these coins?




<b>a</b>	40 cents	<b>b</b>	30 cents
<b>c</b>	50 cents	<b>d</b>	75 cents
<b>e</b>	66 cents	<b>f</b>	60 cents

**5** What is the total value of these coins?



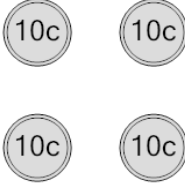
<b>a</b>	20 cents	<b>b</b>	10 cents
<b>c</b>	30 cents	<b>d</b>	70 cents
<b>e</b>	40 cents		

**6** What is the total value of these coins?



<b>a</b>	30 cents	<b>b</b>	40 cents
<b>c</b>	20 cents	<b>d</b>	31 cents
<b>e</b>	50 cents		

**7** What is the total value of these coins?



<b>a</b>	40 cents	<b>b</b>	50 cents
<b>c</b>	51 cents	<b>d</b>	41 cents
<b>e</b>	60 cents	<b>f</b>	46 cents