




Math worksheet on 'Coin Math - Count Total - Dimes (Level 2)'. Part of a broader unit on 'Coin Math - Practice'


Learn online: app.mobius.academy/math/units/coin_math_practice/

1 What is the total value of these coins?




| | |
|----------------------|----------------------|
| a 50 cents | b 60 cents |
| c 76 cents | d 40 cents |
| e 65 cents | f 55 cents |

2 What is the total value of these coins?




| | |
|----------------------|----------------------|
| a 70 cents | b 50 cents |
| c 60 cents | d 40 cents |
| e 80 cents | |

3 What is the total value of these coins?




| | |
|----------------------|----------------------|
| a 85 cents | b 40 cents |
| c 50 cents | d 60 cents |
| e 70 cents | f 51 cents |

4 What is the total value of these coins?




| | |
|----------------------|----------------------|
| a 10 cents | b 20 cents |
| c 12 cents | d 30 cents |
| | |

5 What is the total value of these coins?




| | |
|----------------------|----------------------|
| a 60 cents | b 62 cents |
| c 70 cents | d 50 cents |
| e 80 cents | |

6 What is the total value of these coins?



| | |
|----------------------|----------------------|
| a 50 cents | b 46 cents |
| c 40 cents | d 60 cents |
| e 30 cents | f 41 cents |

7 What is the total value of these coins?



| | |
|----------------------|----------------------|
| a 40 cents | b 50 cents |
| c 85 cents | d 70 cents |
| e 60 cents | |