




Math worksheet on 'Coin Math - Count Total - Dimes (Level 3)'. Part of a broader unit on 'Coin Math - Practice'


Learn online: [app.mobius.academy/math/units/coin\\_math\\_practice/](http://app.mobius.academy/math/units/coin_math_practice/)

**1** What is the total value of these coins?




<b>a</b> 55 cents	<b>b</b> 30 cents
<b>c</b> 70 cents	<b>d</b> 25 cents
<b>e</b> 10 cents	<b>f</b> 20 cents

**2** What is the total value of these coins?




<b>a</b> 51 cents	<b>b</b> 41 cents
<b>c</b> 50 cents	<b>d</b> 55 cents
<b>e</b> 40 cents	<b>f</b> 30 cents

**3** What is the total value of these coins?




<b>a</b> 70 cents	<b>b</b> 80 cents
<b>c</b> 40 cents	<b>d</b> 75 cents
<b>e</b> 50 cents	<b>f</b> 60 cents

**4** What is the total value of these coins?



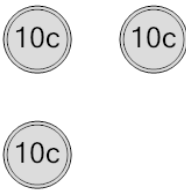
<b>a</b> 60 cents	<b>b</b> 51 cents
<b>c</b> 75 cents	<b>d</b> 50 cents
<b>e</b> 70 cents	<b>f</b> 40 cents

**5** What is the total value of these coins?




<b>a</b> 95 cents	<b>b</b> 90 cents
<b>c</b> 105 cents	<b>d</b> 80 cents
<b>e</b> 70 cents	

**6** What is the total value of these coins?



<b>a</b> 40 cents	<b>b</b> 30 cents
<b>c</b> 20 cents	

**7** What is the total value of these coins?



<b>a</b> 90 cents	<b>b</b> 80 cents
<b>c</b> 115 cents	<b>d</b> 125 cents
<b>e</b> 95 cents	<b>f</b> 100 cents