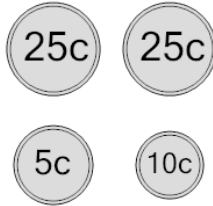




Math worksheet on 'Coin Math - Count Total - Nickels, Dimes, Quarters (Level 1)'. Part of a broader unit on 'Coin Math - Intro'

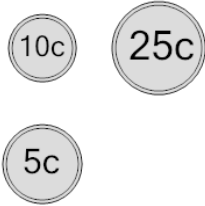
Learn online: app.mobius.academy/math/units/coin_math_intro/

1 What is the total value of these coins?



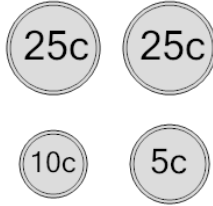
a 40 cents	b 55 cents
c 75 cents	d 65 cents
e 90 cents	f 60 cents

2 What is the total value of these coins?



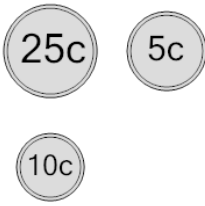
a 30 cents	b 41 cents
c 45 cents	d 40 cents
e 15 cents	

3 What is the total value of these coins?



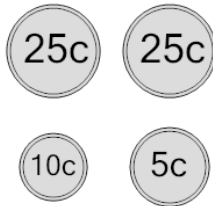
a 90 cents	b 40 cents
c 115 cents	d 65 cents
e 66 cents	f 60 cents

4 What is the total value of these coins?



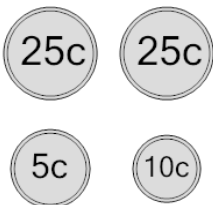
a 30 cents	b 90 cents
c 35 cents	d 45 cents
e 40 cents	f 65 cents

5 What is the total value of these coins?



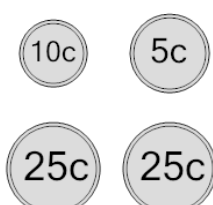
a 75 cents	b 55 cents
c 40 cents	d 90 cents
e 71 cents	f 65 cents

6 What is the total value of these coins?



a 55 cents	b 70 cents
c 85 cents	d 65 cents
e 90 cents	f 115 cents

7 What is the total value of these coins?



a 75 cents	b 40 cents
c 85 cents	d 115 cents
e 65 cents	f 91 cents