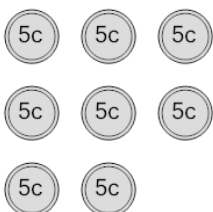




Math worksheet on 'Coin Math - Count Total - Nickels (Level 3)'. Part of a broader unit on 'Coin Math - Practice'

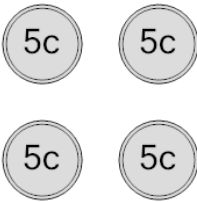
Learn online: app.mobius.academy/math/units/coin_math_practice/

1 What is the total value of these coins?



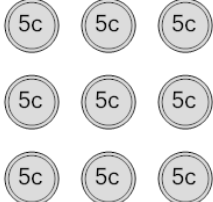
a 46 cents	b 35 cents
c 45 cents	d 50 cents
e 40 cents	

2 What is the total value of these coins?



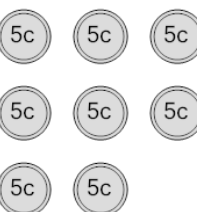
a 50 cents	b 25 cents
c 30 cents	d 20 cents
e 15 cents	

3 What is the total value of these coins?



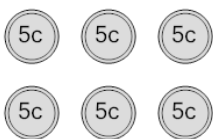
a 60 cents	b 45 cents
c 50 cents	d 40 cents
e 55 cents	

4 What is the total value of these coins?



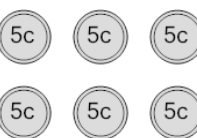
a 35 cents	b 55 cents
c 45 cents	d 65 cents
e 40 cents	f 50 cents

5 What is the total value of these coins?



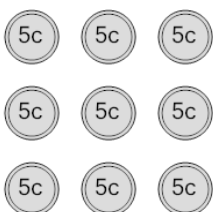
a 80 cents	b 35 cents
c 30 cents	d 31 cents
e 65 cents	

6 What is the total value of these coins?



a 65 cents	b 35 cents
c 30 cents	d 40 cents
e 25 cents	

7 What is the total value of these coins?



a 55 cents	b 45 cents
c 65 cents	d 46 cents
e 80 cents	f 50 cents