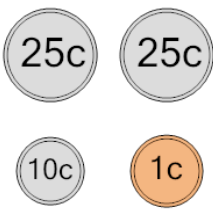




Math worksheet on 'Coin Math - Count Total - Pennies, Dimes, Quarters (Level 1)'. Part of a broader unit on 'Coin Math - Intro'

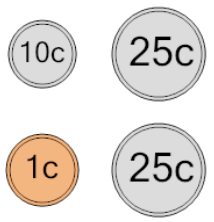
Learn online: app.mobius.academy/math/units/coin_math_intro/

1 What is the total value of these coins?



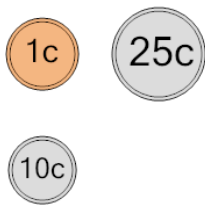
a 86 cents	b 71 cents
c 62 cents	d 36 cents
e 61 cents	f 111 cents

2 What is the total value of these coins?



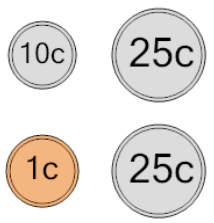
a 111 cents	b 62 cents
c 61 cents	d 96 cents
e 86 cents	f 36 cents

3 What is the total value of these coins?



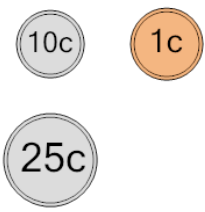
a 47 cents	b 11 cents
c 38 cents	d 61 cents
e 36 cents	f 86 cents

4 What is the total value of these coins?



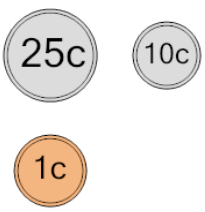
a 86 cents	b 61 cents
c 72 cents	d 62 cents
e 36 cents	f 51 cents

5 What is the total value of these coins?



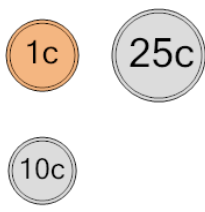
a 36 cents	b 26 cents
c 46 cents	d 61 cents
e 37 cents	

6 What is the total value of these coins?



a 66 cents	b 41 cents
c 11 cents	d 35 cents
e 36 cents	f 56 cents

7 What is the total value of these coins?



a 86 cents	b 36 cents
c 51 cents	d 61 cents
e 26 cents	f 41 cents