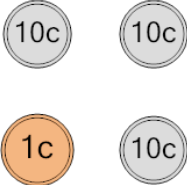




Math worksheet on 'Coin Math - Count Total - Pennies and Dimes (Level 1)'. Part of a broader unit on 'Coin Math - Intro'

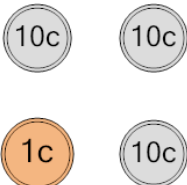
Learn online: app.mobius.academy/math/units/coin_math_intro/

1 What is the total value of these coins?




a	37 cents	b	57 cents
c	51 cents	d	32 cents
e	41 cents	f	31 cents

2 What is the total value of these coins?




a	31 cents	b	21 cents
c	36 cents	d	51 cents
e	57 cents	f	30 cents

3 What is the total value of these coins?




a	12 cents	b	11 cents
c	31 cents	d	10 cents
e	13 cents		

4 What is the total value of these coins?




a	1 cents	b	31 cents
c	13 cents	d	12 cents
e	11 cents	f	10 cents

5 What is the total value of these coins?



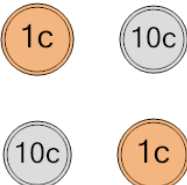
a	12 cents	b	21 cents
c	1 cents	d	13 cents
e	11 cents	f	37 cents

6 What is the total value of these coins?



a	31 cents	b	10 cents
c	1 cents	d	12 cents
e	36 cents	f	11 cents

7 What is the total value of these coins?



a	22 cents	b	32 cents
c	21 cents	d	12 cents
e	23 cents	f	52 cents